

## Haryana Staff Selection Commission

### Notations :

- 1.Options shown in green color and with ✓ icon are correct.
- 2.Options shown in red color and with ✗ icon are incorrect.

<b>Subject Name:</b>	CAT 4 Junior Scale Stenographer English CBT Exam
<b>Total Marks:</b>	200
<b>Display Marks:</b>	Yes
<b>Calculator:</b>	None
<b>Magnifying Glass Required?:</b>	No
<b>Ruler Required?:</b>	No
<b>Eraser Required?:</b>	No
<b>Scratch Pad Required?:</b>	No
<b>Rough Sketch/Notepad Required?:</b>	No
<b>Protractor Required?:</b>	No

CAT 4 Junior Scale Stenographer English CBT Exam

**Group Marks:** 200

CAT 4 Junior Scale Stenographer English CBT Exam

<b>Section Marks:</b>	200
<b>Display Number Panel:</b>	Yes
<b>Group All Questions:</b>	No

**Question Number : 1 Question Id : 168000101 Display Question Number : Yes Single Line Question Option : No Option Orientation : Vertical**

Who among the following scholars called Maharaja Surajmal 'Plato of the Jat tribe'?

### Options :

1. ✗ D. C. Sarkar
2. ✓ J. N. Sarkar
3. ✗ Harbans Mukhia
4. ✗ Satish Chandra

**Question Number : 1 Question Id : 168000101 Display Question Number : Yes Single Line Question Option : No Option Orientation : Vertical**

निम्नलिखित विद्वानों में से किसने महाराज सूरजमल को 'जाट जनजाति का प्लेटो' कहा था?

Options :

1. ✘ डी. सी. सरकार
2. ✔ जे. एन. सरकार
3. ✘ हरबंस मुखिया
4. ✘ सतीश चन्द्र

Question Number : 2 Question Id : 168000102 Display Question Number : Yes Single Line Question Option : No Option Orientation : Vertical

Baba Farid preached Sufism mostly while residing at Ajodhan and \_\_\_\_\_.

Options :

1. ✘ Ambala
2. ✔ Hansi
3. ✘ Karnal
4. ✘ Panipat

Question Number : 2 Question Id : 168000102 Display Question Number : Yes Single Line Question Option : No Option Orientation : Vertical

अजोधन और \_\_\_\_\_ में निवास के दौरान बाबा फरीद ने सूफीवाद का प्रचार किया था।

Options :

1. ✘ अंबाला
2. ✔ हांसी
3. ✘ करनाल
4. ✘ पानीपत

Question Number : 3 Question Id : 168000103 Display Question Number : Yes Single Line Question Option : No Option Orientation : Vertical

The mausoleum of Bu-Ali-Shah Qalandar is situated in:

Options :

1. ✘ Jind
2. ✔ Panipat
3. ✘ Rohtak
4. ✘ Sonipat

Question Number : 3 Question Id : 168000103 Display Question Number : Yes Single Line Question Option : No Option Orientation : Vertical

बू-अली-शाह कलंदर का मकबरा कहाँ स्थित है?

Options :

1. ✘ जींद
2. ✔ पानीपत
3. ✘ रोहतक
4. ✘ सोनीपत

Question Number : 4 Question Id : 168000104 Display Question Number : Yes Single Line Question Option : No Option Orientation : Vertical

'Bikat Kahani', the Sufi work of romantic poetry, was written by:

Options :

1. ✔ Mohammad Afzal
2. ✘ Shaikh Shah Ali
3. ✘ Shaikh Aman Allah
4. ✘ Shaikh Usman Jindapir

Question Number : 4 Question Id : 168000104 Display Question Number : Yes Single Line Question Option : No Option Orientation : Vertical

'बिकट कहानी' सूफी कार्य की एक रोमांटिक कविता, किसके द्वारा लिखी गयी थी?

Options :

1. ✔ मोहम्मद अफजल

2. ✘ शेख शाह अली
3. ✘ शेख अमान अल्लाह
4. ✘ शेख उस्मान जिंदापीर

Question Number : 5 Question Id : 168000105 Display Question Number : Yes Single Line Question Option : No Option Orientation : Vertical

In the financial year 2016-17, the primary sector in Haryana was growing approximately at:

Options :

1. ✘ 1.1%
2. ✔ 7%
3. ✘ 10.3%
4. ✘ 15.8%

Question Number : 5 Question Id : 168000105 Display Question Number : Yes Single Line Question Option : No Option Orientation : Vertical

वित्तीय वर्ष 2016-17 में, हरियाणा के प्राथमिक क्षेत्र में लगभग कितनी वृद्धि हुई थी?

Options :

1. ✘ 1.1%
2. ✔ 7%
3. ✘ 10.3%
4. ✘ 15.8%

Question Number : 6 Question Id : 168000106 Display Question Number : Yes Single Line Question Option : No Option Orientation : Vertical

Environment Department of Haryana is going to establish an 'Environment Training Institute' at:

Options :

1. ✘ Meham
2. ✔ Manesar
3. ✘ Thanesar

4. ✘ Beri

Question Number : 6 Question Id : 168000106 Display Question Number : Yes Single Line Question Option : No Option Orientation : Vertical

हरियाणा पर्यावरण विभाग इस शहर में एक 'पर्यावरण प्रशिक्षण संस्थान' स्थापित करने जा रहा है:

Options :

1. ✘ मेहम

2. ✔ मानेसर

3. ✘ थानेसर

4. ✘ बेरी

Question Number : 7 Question Id : 168000107 Display Question Number : Yes Single Line Question Option : No Option Orientation : Vertical

Which of the following cities in Haryana has been renamed as Balramgarh?

Options :

1. ✘ Karnal

2. ✘ Panchkula

3. ✔ Ballabhgarh

4. ✘ Faridabad

Question Number : 7 Question Id : 168000107 Display Question Number : Yes Single Line Question Option : No Option Orientation : Vertical

हरियाणा में निम्नलिखित शहरों में से किसका नाम बदलकर बलरामगढ़ कर दिया गया है?

Options :

1. ✘ करनाल

2. ✘ पंचकुला

3. ✔ बल्लभगढ़

4. ✘ फरीदाबाद

Question Number : 8 Question Id : 168000108 Display Question Number : Yes Single Line Question Option : No Option Orientation : Vertical

Which among the following is **NOT** one of the nine priority areas in Haryana's budget for the financial year 2016-17?

Options :

1. ✘ Agriculture
2. ✔ Artificial intelligence
3. ✘ Women empowerment
4. ✘ Urban development

Question Number : 8 Question Id : 168000108 Display Question Number : Yes Single Line Question Option : No Option Orientation : Vertical

निम्नलिखित में से कौन सा क्षेत्र वित्तीय वर्ष 2016-17 में हरियाणा के बजट में निर्धारित नौ प्राथमिकता वाले क्षेत्रों में से एक नहीं है?

Options :

1. ✘ कृषि
2. ✔ कृत्रिम बोधगम्यता
3. ✘ महिला सशक्तिकरण
4. ✘ शहरी विकास

Question Number : 9 Question Id : 168000109 Display Question Number : Yes Single Line Question Option : No Option Orientation : Vertical

'Aainon Ke Shahar Mein', a collection of ghazals, has been authored by:

Options :

1. ✘ Liladhar Viyogi
2. ✘ Manjit Sharma
3. ✔ Madhav Kaushik
4. ✘ Anil Kumar Sharma

Question Number : 9 Question Id : 168000109 Display Question Number : Yes Single Line Question Option : No Option Orientation : Vertical

गजल संग्रह 'आइनों के शहर में' इन्होंने लिखा है:



Options :

1. ✘ लीलाधर वियोगी
2. ✘ मंजीत शर्मा
3. ✔ माधव कौशिक
4. ✘ अनिल कुमार शर्मा

Question Number : 10 Question Id : 168000110 Display Question Number : Yes Single Line Question Option : No Option Orientation : Vertical

The poetry collection 'Toota Hua Aadmi' has been authored by:

Options :

1. ✔ Subhash Rastogi
2. ✘ Rohit Yadav
3. ✘ Bharatbhushan Sanghiwal Sanghi
4. ✘ Dr. Yashpal Vaid

Question Number : 10 Question Id : 168000110 Display Question Number : Yes Single Line Question Option : No Option Orientation : Vertical

काव्य संग्रह 'टूटा हुआ आदमी' इन्होंने लिखा है:

Options :

1. ✔ सुभाष रस्तोगी
2. ✘ रोहित यादव
3. ✘ भारतभूषण सांघीवाल सांघी
4. ✘ डॉ. यशपाल वैद

Question Number : 11 Question Id : 168000111 Display Question Number : Yes Single Line Question Option : No Option Orientation : Vertical

The short story books titled 'Bikhrey Sapney' and 'Antardwandva' have been authored by:

Options :

1. ✘ Shivanad Malik
2. ✘ Madan Gopal Shastri
3. ✔ Shakuntala Brijmohan
4. ✘ Naresh Kumar Sharma

Question Number : 11 Question Id : 168000111 Display Question Number : Yes Single Line Question Option : No Option Orientation : Vertical

लघु कथा पुस्तकें 'बिखरे सपने' और 'अन्तर्द्वंद' के लेखक हैं:

Options :

1. ✘ शिवानंद मलिक
2. ✘ मदन गोपाल शास्त्री
3. ✔ शकुंतला बृजमोहन
4. ✘ नरेश कुमार शर्मा

Question Number : 12 Question Id : 168000112 Display Question Number : Yes Single Line Question Option : No Option Orientation : Vertical

Which of the following is NOT a lake of Haryana?

Options :

1. ✘ Badkhal Lake
2. ✘ Damdama Lake
3. ✔ Wular Lake
4. ✘ Peacock Lake

Question Number : 12 Question Id : 168000112 Display Question Number : Yes Single Line Question Option : No Option Orientation : Vertical

निम्नलिखित में से कौन सी एक हरियाणा की झील नहीं है?

Options :

1. ✘ बड़खल झील



2. ✘ दमदमा झील

3. ✔ वुलर झील

4. ✘ मयूर झील (पीकाँक झील)

Question Number : 13 Question Id : 168000113 Display Question Number : Yes Single Line Question Option : No Option Orientation : Vertical

Which is the state animal of Haryana?

Options :

1. ✘ Deer

2. ✔ Black buck

3. ✘ Antelope

4. ✘ Blue bull

Question Number : 13 Question Id : 168000113 Display Question Number : Yes Single Line Question Option : No Option Orientation : Vertical

हरियाणा का राज्य पशु कौन सा है?

Options :

1. ✘ हिरन

2. ✔ काला हिरन

3. ✘ कुरंग

4. ✘ नीलगाय

Question Number : 14 Question Id : 168000114 Display Question Number : Yes Single Line Question Option : No Option Orientation : Vertical

What is the forest cover in Haryana (as per the Forest Report 2013)?

Options :

1. ✘ 1046 sq km

2. ✘ 1256 sq km

3. ✘ 1368 sq km

4. ✔ 1586 sq km

Question Number : 14 Question Id : 168000114 Display Question Number : Yes Single Line Question Option : No Option Orientation : Vertical

हरियाणा का वन क्षेत्र (वन रिपोर्ट 2013 के अनुसार) कितना है?

Options :

1. ✘ 1046 वर्ग किमी

2. ✘ 1256 वर्ग किमी

3. ✘ 1368 वर्ग किमी

4. ✔ 1586 वर्ग किमी

Question Number : 15 Question Id : 168000115 Display Question Number : Yes Single Line Question Option : No Option Orientation : Vertical

Out of 80 castes, \_\_\_\_\_ castes/communities have been notified either as a Scheduled Caste or Backward Class in Haryana.

Options :

1. ✘ 56

2. ✘ 60

3. ✔ 63

4. ✘ 65

Question Number : 15 Question Id : 168000115 Display Question Number : Yes Single Line Question Option : No Option Orientation : Vertical

80 जातियों में से, \_\_\_\_\_ जातियों / समुदायों को हरियाणा में अनुसूचित जाति या पिछड़ा वर्ग के रूप में अधिसूचित किया गया है।

Options :

1. ✘ 56

2. ✘ 60

3. ✔ 63

4. ✘ 65

Question Number : 16 Question Id : 168000116 Display Question Number : Yes Single Line Question Option : No Option Orientation : Vertical

Who is the Health Minister of Haryana?

Options :

1. ✔ Anil Vij
2. ✘ Kavita Jain
3. ✘ Narbir Singh
4. ✘ Ram Bilas Sharma

Question Number : 16 Question Id : 168000116 Display Question Number : Yes Single Line Question Option : No Option Orientation : Vertical

हरियाणा के स्वास्थ्य मंत्री कौन हैं?

Options :

1. ✔ अनिल विज
2. ✘ कविता जैन
3. ✘ नरबीर सिंह
4. ✘ राम बिलास शर्मा

Question Number : 17 Question Id : 168000117 Display Question Number : Yes Single Line Question Option : No Option Orientation : Vertical

E- Panchayat is one of the State Mission Mode Projects (MMP), initiated by the Ministry of Panchayati Raj (MoPR) under \_\_\_\_\_ of Government of India.

Options :

1. ✘ RLEP
2. ✘ NREP
3. ✔ NeGP
4. ✘ ReGP

Question Number : 17 Question Id : 168000117 Display Question Number : Yes Single Line Question Option : No Option Orientation : Vertical

भारत सरकार के \_\_\_\_\_ के तहत पंचायती राज मंत्रालय (MoPR) द्वारा शुरू किया गया ई-पंचायत राज्य मिशन मोड प्रोजेक्ट (MMP) में से एक है।

Options :

1. ✘ RLEP
2. ✘ NREP
3. ✔ NeGP
4. ✘ ReGP

Question Number : 18 Question Id : 168000118 Display Question Number : Yes Single Line Question Option : No Option Orientation : Vertical

The Haryana Janhit Congress (HJC) party was formed by former Chief Minister of Haryana Bhajan Lal in:

Options :

1. ✘ 2004
2. ✔ 2007
3. ✘ 2009
4. ✘ 2010

Question Number : 18 Question Id : 168000118 Display Question Number : Yes Single Line Question Option : No Option Orientation : Vertical

हरियाणा के पूर्व मुख्यमंत्री भजन लाल द्वारा हरियाणा जनहित कांग्रेस (HJC) का गठन कब किया गया था?

Options :

1. ✘ 2004
2. ✔ 2007
3. ✘ 2009
4. ✘ 2010

Question Number : 19 Question Id : 168000119 Display Question Number : Yes Single Line Question Option : No Option Orientation : Vertical

As per India State of Forest Report, 2015, the tree cover in Haryana was \_\_\_\_\_ of its total geographical area.

Options :

1. ✔ 3.07%

2. ✘ 5.25%

3. ✘ 1.03%

4. ✘ 2.11%

Question Number : 19 Question Id : 168000119 Display Question Number : Yes Single Line Question Option : No Option Orientation : Vertical

भारत राज्य वन रिपोर्ट 2015 के अनुसार, हरियाणा में वृक्ष आच्छादित क्षेत्र इसके कुल भौगोलिक क्षेत्र का \_\_\_\_\_ था।

Options :

1. ✔ 3.07%

2. ✘ 5.25%

3. ✘ 1.03%

4. ✘ 2.11%

Question Number : 20 Question Id : 168000120 Display Question Number : Yes Single Line Question Option : No Option Orientation : Vertical

Which among the following is **NOT** true with respect to river Ghaggar?

Options :

1. ✔ It flows through NCT of Delhi, Punjab and Haryana

2. ✘ It originates in the Shivalik Hills

3. ✘ It is a perennial river

4. ✘ It is an intermittent river

Question Number : 20 Question Id : 168000120 Display Question Number : Yes Single Line Question Option : No Option Orientation : Vertical

घग्गर नदी के संबंध में निम्नलिखित में से कौन सा कथन सही नहीं है?

Options :

1. ✔ यह दिल्ली के राष्ट्रीय राजधानी क्षेत्र, पंजाब और हरियाणा से होकर बहती है।

2. ✘ इसका उद्गम शिवालिक की पहाड़ियां हैं।

3. ✘ यह बारहमासी नदी है।



4. ✘ यह एक आंतररायिक नदी है।

Question Number : 21 Question Id : 168000121 Display Question Number : Yes Single Line Question Option : No Option Orientation : Vertical

CETP stands for:

\_\_\_\_\_ Effluent Treatment Plant.

Options :

1. ✓ Common
2. ✘ Commercial
3. ✘ Concentrated
4. ✘ Co-ordinated

Question Number : 21 Question Id : 168000121 Display Question Number : Yes Single Line Question Option : No Option Orientation : Vertical

सीईटीपी (CETP) का अर्थ है:

\_\_\_\_\_ एफ्लुएंट ट्रीटमेंट प्लांट।

Options :

1. ✓ कॉमन
2. ✘ कमर्शियल
3. ✘ कन्संटेन्टेड
4. ✘ को- ऑर्डिनेटेड

Question Number : 22 Question Id : 168000122 Display Question Number : Yes Single Line Question Option : No Option Orientation : Vertical

The Baisakhi Mela, which is celebrated every year in Pinjore Gardens is a \_\_\_\_\_ day event.

Options :

1. ✓ two
2. ✘ five
3. ✘ seven
4. ✘ nine

Question Number : 22 Question Id : 168000122 Display Question Number : Yes Single Line Question Option : No Option Orientation : Vertical

प्रत्येक वर्ष पिंजौर उद्यान में मनाये जाने वाले बैसाखी मेले में \_\_\_\_\_ दिन का कार्यक्रम होता है।

Options :

1. ✓ दो

2. ✗ पांच

3. ✗ सात

4. ✗ नौ

Question Number : 23 Question Id : 168000123 Display Question Number : Yes Single Line Question Option : No Option Orientation : Vertical

The Mango Mela, which is celebrated every year in Pinjore Gardens, was first held in:

Options :

1. ✗ 2001

2. ✗ 1995

3. ✗ 1997

4. ✓ 1992

Question Number : 23 Question Id : 168000123 Display Question Number : Yes Single Line Question Option : No Option Orientation : Vertical

आम मेला (मैंगो मेला), जो प्रत्येक वर्ष पिंजौर के उद्यान में मनाया जाता है, सबसे पहले कब आयोजित किया गया था?

Options :

1. ✗ 2001

2. ✗ 1995

3. ✗ 1997

4. ✓ 1992

Question Number : 24 Question Id : 168000124 Display Question Number : Yes Single Line Question Option : No Option Orientation : Vertical

Which among the following places in Haryana is famous for bone carvings?

Options :

1. ✘ Jhajjar
2. ✘ Hisar
3. ✔ Faridabad
4. ✘ Gurugram

Question Number : 24 Question Id : 168000124 Display Question Number : Yes Single Line Question Option : No Option Orientation : Vertical

निम्नलिखित में से कौन सा स्थान हरियाणा में हड्डी की नक्काशी के लिए प्रसिद्ध है?

Options :

1. ✘ झज्जर
2. ✘ हिसार
3. ✔ फरीदाबाद
4. ✘ गुरुग्राम

Question Number : 25 Question Id : 168000125 Display Question Number : Yes Single Line Question Option : No Option Orientation : Vertical

The Surajkund Mela, which is celebrated every year in Faridabad, is a \_\_\_\_\_ day event.

Options :

1. ✘ twelve
2. ✔ fifteen
3. ✘ seventeen
4. ✘ nineteen

Question Number : 25 Question Id : 168000125 Display Question Number : Yes Single Line Question Option : No Option Orientation : Vertical

हर वर्ष फरीदाबाद में मनाये जानेवाले सूरजकुंड मेले में \_\_\_\_\_ दिनों का कार्यक्रम होता है।

Options :

1. ✘ बारह

2. ✓ पन्द्रह

3. ✗ सत्रह

4. ✗ उन्नीस

Question Number : 26 Question Id : 168000126 Display Question Number : Yes Single Line Question Option : No Option Orientation : Vertical

pl series is a cluster of \_\_\_\_\_ consonants.

Options :

1. ✓ double

2. ✗ simple

3. ✗ single

4. ✗ halved

Question Number : 26 Question Id : 168000126 Display Question Number : Yes Single Line Question Option : No Option Orientation : Vertical

pl series is a cluster of \_\_\_\_\_ consonants.

Options :

1. ✓ double

2. ✗ simple

3. ✗ single

4. ✗ halved

Question Number : 27 Question Id : 168000127 Display Question Number : Yes Single Line Question Option : No Option Orientation : Vertical

The consonant “l” represents the word \_\_\_\_\_ in a phrase.

Options :

1. ✗ well

2. ✗ lord

3. ✓ will

4. ✗ lay

Question Number : 27 Question Id : 168000127 Display Question Number : Yes Single Line Question Option : No Option Orientation : Vertical

The consonant “l” represents the word \_\_\_\_\_ in a phrase.

Options :

1. ✗ well

2. ✗ lord

3. ✓ will

4. ✗ lay

Question Number : 28 Question Id : 168000128 Display Question Number : Yes Single Line Question Option : No Option Orientation : Vertical

Accom is expressed by stroke \_\_\_\_\_, either joined or disjoined.

Options :

1. ✗ M

2. ✗ A

3. ✗ C

4. ✓ K

Question Number : 28 Question Id : 168000128 Display Question Number : Yes Single Line Question Option : No Option Orientation : Vertical

Accom is expressed by stroke \_\_\_\_\_, either joined or disjoined.

Options :

1. ✗ M

2. ✗ A

3. ✗ C

4. ✓ K

Question Number : 29 Question Id : 168000129 Display Question Number : Yes Single Line Question Option : No Option Orientation : Vertical



When the prefix “in” means not, it is always expressed by the stroke \_\_\_\_\_.

Options :

1. ✘ N doubled
2. ✔ N stroke
3. ✘ N halved
4. ✘ N halved and thickened

Question Number : 29 Question Id : 168000129 Display Question Number : Yes Single Line Question Option : No Option Orientation : Vertical

When the prefix “in” means not, it is always expressed by the stroke \_\_\_\_\_.

Options :

1. ✘ N doubled
2. ✔ N stroke
3. ✘ N halved
4. ✘ N halved and thickened

Question Number : 30 Question Id : 168000130 Display Question Number : Yes Single Line Question Option : No Option Orientation : Vertical

‘Kr’ is an intersection for \_\_\_\_\_.

Options :

1. ✔ corporation
2. ✘ characteristic
3. ✘ care
4. ✘ capable

Question Number : 30 Question Id : 168000130 Display Question Number : Yes Single Line Question Option : No Option Orientation : Vertical

‘Kr’ is an intersection for \_\_\_\_\_.

Options :

1. ✔ corporation

2. ✘ characteristic

3. ✘ care

4. ✘ capable

Question Number : 31 Question Id : 168000131 Display Question Number : Yes Single Line Question Option : No Option Orientation : Vertical

Herein is a \_\_\_\_\_ word.

Options :

1. ✘ simple

2. ✘ single

3. ✔ compound

4. ✘ derivative

Question Number : 31 Question Id : 168000131 Display Question Number : Yes Single Line Question Option : No Option Orientation : Vertical

Herein is a \_\_\_\_\_ word.

Options :

1. ✘ simple

2. ✘ single

3. ✔ compound

4. ✘ derivative

Question Number : 32 Question Id : 168000132 Display Question Number : Yes Single Line Question Option : No Option Orientation : Vertical

Short form "owner" is written \_\_\_\_\_.

Options :

1. ✘ on the line

2. ✔ below the line

3. ✘ through the line

4. ✘ above the line

Question Number : 32 Question Id : 168000132 Display Question Number : Yes Single Line Question Option : No Option Orientation : Vertical

Short form "owner" is written \_\_\_\_\_.

Options :

1. ✘ on the line

2. ✔ below the line

3. ✘ through the line

4. ✘ above the line

Question Number : 33 Question Id : 168000133 Display Question Number : Yes Single Line Question Option : No Option Orientation : Vertical

When a good joining is obtained, the small hook \_\_\_\_\_ is used in the middle of a word.

Options :

1. ✔ N

2. ✘ shun

3. ✘ F

4. ✘ V

Question Number : 33 Question Id : 168000133 Display Question Number : Yes Single Line Question Option : No Option Orientation : Vertical

When a good joining is obtained, the small hook \_\_\_\_\_ is used in the middle of a word.

Options :

1. ✔ N

2. ✘ shun

3. ✘ F

4. ✘ V

Question Number : 34 Question Id : 168000134 Display Question Number : Yes Single Line Question Option : No Option Orientation : Vertical

Imposition is represented by \_\_\_\_\_.

Options :

1. ✘ Shun hook

2. ✘ S circle

3. ✔ S-shun curl

4. ✘ ses circle

Question Number : 34 Question Id : 168000134 Display Question Number : Yes Single Line Question Option : No Option Orientation : Vertical

Imposition is represented by \_\_\_\_\_.

Options :

1. ✘ Shun hook

2. ✘ S circle

3. ✔ S-shun curl

4. ✘ ses circle

Question Number : 35 Question Id : 168000135 Display Question Number : Yes Single Line Question Option : No Option Orientation : Vertical

When m follows pr, it is expressed by \_\_\_\_\_.

Options :

1. ✘ mp

2. ✘ mb

3. ✔ mpr

4. ✘ mbl

Question Number : 35 Question Id : 168000135 Display Question Number : Yes Single Line Question Option : No Option Orientation : Vertical

When m follows pr, it is expressed by \_\_\_\_\_.

Options :

1. ✘ mp

2. ✘ mb

3. ✔ mpr

4. ✘ mbl

Question Number : 36 Question Id : 168000136 Display Question Number : Yes Single Line Question Option : No Option Orientation : Vertical

Long \_\_\_\_\_ is represented by a heavy dash and is a 2<sup>nd</sup> place vowel.

Options :

1. ✔ ā

2. ✘ ě

3. ✘ ō

4. ✘ ů

Question Number : 36 Question Id : 168000136 Display Question Number : Yes Single Line Question Option : No Option Orientation : Vertical

Long \_\_\_\_\_ is represented by a heavy dash and is a 2<sup>nd</sup> place vowel.

Options :

1. ✔ ā

2. ✘ ě

3. ✘ ō

4. ✘ ů

Question Number : 37 Question Id : 168000137 Display Question Number : Yes Single Line Question Option : No Option Orientation : Vertical

A small initial loop represents the sound \_\_\_\_\_.

Options :

1. ✘ sd

2. ✘ ses

3. ✘ sez

4. ✔ st

Question Number : 37 Question Id : 168000137 Display Question Number : Yes Single Line Question Option : No Option Orientation : Vertical

A small initial loop represents the sound \_\_\_\_\_.

Options :



1. ✘ sd
2. ✘ ses
3. ✘ sez
4. ✔ st

Question Number : 38 Question Id : 168000138 Display Question Number : Yes Single Line Question Option : No Option Orientation : Vertical

The shun hook can be used in the \_\_\_\_\_ of a word when an easy joining can be made.

Options :

1. ✔ middle
2. ✘ end
3. ✘ beginning
4. ✘ upward

Question Number : 38 Question Id : 168000138 Display Question Number : Yes Single Line Question Option : No Option Orientation : Vertical

The shun hook can be used in the \_\_\_\_\_ of a word when an easy joining can be made.

Options :

1. ✔ middle
2. ✘ end
3. ✘ beginning
4. ✘ upward

Question Number : 39 Question Id : 168000139 Display Question Number : Yes Single Line Question Option : No Option Orientation : Vertical

“R” downward is used as an intersection for:

Options :

1. ✘ army
2. ✔ arrange
3. ✘ railway

4. ✘ require

Question Number : 39 Question Id : 168000139 Display Question Number : Yes Single Line Question Option : No Option Orientation : Vertical

“R” downward is used as an intersection for:

Options :

1. ✘ army

2. ✔ arrange

3. ✘ railway

4. ✘ require

Question Number : 40 Question Id : 168000140 Display Question Number : Yes Single Line Question Option : No Option Orientation : Vertical

\_\_\_\_\_ hook is written on the side opposite to the last vowel.

Options :

1. ✘ f

2. ✘ v

3. ✔ n

4. ✘ r

Question Number : 40 Question Id : 168000140 Display Question Number : Yes Single Line Question Option : No Option Orientation : Vertical

\_\_\_\_\_ hook is written on the side opposite to the last vowel.

Options :

1. ✘ f


2. ✘ v

3. ✔ n

4. ✘ r

Question Number : 41 Question Id : 168000141 Display Question Number : Yes Single Line Question Option : No Option Orientation : Vertical

Select the right word given below to fill in the blank.



Options :

1. ✓ A


2. ✗ B

3. ✗ C

4. ✗ D

Question Number : 41 Question Id : 168000141 Display Question Number : Yes Single Line Question Option : No Option Orientation : Vertical

Select the right word given below to fill in the blank.



Options :

1. ✓ A


2. ✗ B

3. ✗ C

4. ✗ D

Question Number : 42 Question Id : 168000142 Display Question Number : Yes Single Line Question Option : No Option Orientation : Vertical

Select the right word given below to fill in the blank.



Options :

1. ✘ A


2. ✔ B

3. ✘ C

4. ✘ D

Question Number : 42 Question Id : 168000142 Display Question Number : Yes Single Line Question Option : No Option Orientation : Vertical

Select the right word given below to fill in the blank.





Options :

1. ✘ A


2. ✔ B

3. ✘ C

4. ✘ D

Question Number : 43 Question Id : 168000143 Display Question Number : Yes Single Line Question Option : No Option Orientation : Vertical


Select the right word given below to fill in the blank.



A 

B 

C 

D 

Options :

1. ✔ A


2. ✘ B

3. ✘ C

4. ✘ D

Question Number : 43 Question Id : 168000143 Display Question Number : Yes Single Line Question Option : No Option Orientation : Vertical

Select the right word given below to fill in the blank.



Options :

1. ✓ A


2. ✗ B

3. ✗ C

4. ✗ D

Question Number : 44 Question Id : 168000144 Display Question Number : Yes Single Line Question Option : No Option Orientation : Vertical

Select the right word given below to fill in the blank.



Options :

1. ✘ A


2. ✘ B

3. ✔ C

4. ✘ D

Question Number : 44 Question Id : 168000144 Display Question Number : Yes Single Line Question Option : No Option Orientation : Vertical

Select the right word given below to fill in the blank.



A 

B 

C 

D 

Options :

1. ✘ A


2. ✘ B

3. ✔ C

4. ✘ D

Question Number : 45 Question Id : 168000145 Display Question Number : Yes Single Line Question Option : No Option Orientation : Vertical

Select the right word given below to fill in the blank.



A 

B 

C 

D 

Options :

1. ✘ A


2. ✔ B

3. ✘ C

4. ✘ D

Question Number : 45 Question Id : 168000145 Display Question Number : Yes Single Line Question Option : No Option Orientation : Vertical

Select the right word given below to fill in the blank.



A 

B 

C 

D 

Options :

1. ✘ A
2. ✔ B
3. ✘ C
4. ✘ D

**Question Number : 46 Question Id : 168000146 Display Question Number : Yes Single Line Question Option : No Option Orientation : Vertical**

*Fill in the blanks in the sentence below with suitable articles. Choose your answer from the options given.*

\_\_\_\_\_ koala has been released into \_\_\_\_\_ wild in Australia after recovering from \_\_\_\_\_ 16 km car journey clinging to \_\_\_\_\_ axle of a four-wheel drive.

**Options :**

1. ✔ A, the, a, the
2. ✘ A, the, a, an
3. ✘ A, a, a, the
4. ✘ A, a, the, an

**Question Number : 46 Question Id : 168000146 Display Question Number : Yes Single Line Question Option : No Option Orientation : Vertical**

*Fill in the blanks in the sentence below with suitable articles. Choose your answer from the options given.*

\_\_\_\_\_ koala has been released into \_\_\_\_\_ wild in Australia after recovering from \_\_\_\_\_ 16 km car journey clinging to \_\_\_\_\_ axle of a four-wheel drive.

**Options :**

1. ✔ A, the, a, the
2. ✘ A, the, a, an
3. ✘ A, a, a, the
4. ✘ A, a, the, an

**Question Number : 47 Question Id : 168000147 Display Question Number : Yes Single Line Question Option : No Option Orientation : Vertical**

Fill in the blanks in the sentence below with suitable articles. Choose your answer from the options given.

\_\_\_\_\_ global waste industry needs to get its act together and make sure that \_\_\_\_\_ ever-increasing amounts of plastic waste generated don't end up in \_\_\_\_\_ environment.

Options :

1. ✘ A, the, the
2. ✔ The, the, the
3. ✘ A, an, an
4. ✘ The, an, an

Question Number : 47 Question Id : 168000147 Display Question Number : Yes Single Line Question Option : No Option Orientation : Vertical

Fill in the blanks in the sentence below with suitable articles. Choose your answer from the options given.

\_\_\_\_\_ global waste industry needs to get its act together and make sure that \_\_\_\_\_ ever-increasing amounts of plastic waste generated don't end up in \_\_\_\_\_ environment.

Options :

1. ✘ A, the, the
2. ✔ The, the, the
3. ✘ A, an, an
4. ✘ The, an, an

Question Number : 48 Question Id : 168000148 Display Question Number : Yes Single Line Question Option : No Option Orientation : Vertical

Fill in the blank in the sentence below with a suitable modal verb. Choose your answer from the options given.

If plastic products are designed with recyclability in mind, they \_\_\_\_\_ be recycled many times over.

Options :

1. ✘ shall
2. ✘ may
3. ✔ can
4. ✘ will



Question Number : 48 Question Id : 168000148 Display Question Number : Yes Single Line Question Option : No Option Orientation : Vertical

Fill in the blank in the sentence below with a suitable modal verb. Choose your answer from the options given.

If plastic products are designed with recyclability in mind, they \_\_\_\_\_ be recycled many times over.

Options :

1. ✘ shall
2. ✘ may
3. ✔ can
4. ✘ will

Question Number : 49 Question Id : 168000149 Display Question Number : Yes Single Line Question Option : No Option Orientation : Vertical

Fill in the blank in the sentence below with a suitable collective noun. Choose your answer from the options given.

After the rain stopped, a \_\_\_\_\_ of toads began to croak at night.

Options :

1. ✘ flock
2. ✘ hive
3. ✘ herd
4. ✔ knot

Question Number : 49 Question Id : 168000149 Display Question Number : Yes Single Line Question Option : No Option Orientation : Vertical

Fill in the blank in the sentence below with a suitable collective noun. Choose your answer from the options given.

After the rain stopped, a \_\_\_\_\_ of toads began to croak at night.

Options :

1. ✘ flock
2. ✘ hive
3. ✘ herd
4. ✔ knot

Question Number : 50 Question Id : 168000150 Display Question Number : Yes Single Line Question Option : No Option Orientation : Vertical

A sentence is given in four parts as options. One of the parts contains an error. Choose the option that has the error.

Options :

1. ✘ Snow leopard researchers believe the species' decline may have been.
2. ✘ slowed by conservation projects - including some to protect farm animals
3. ✔ with the predators, which are sometimes
4. ✘ killed in revenge for livestock losses

Question Number : 50 Question Id : 168000150 Display Question Number : Yes Single Line Question Option : No Option Orientation : Vertical

A sentence is given in four parts as options. One of the parts contains an error. Choose the option that has the error.

Options :

1. ✘ Snow leopard researchers believe the species' decline may have been.
2. ✘ slowed by conservation projects - including some to protect farm animals
3. ✔ with the predators, which are sometimes
4. ✘ killed in revenge for livestock losses

Question Number : 51 Question Id : 168000151 Display Question Number : Yes Single Line Question Option : No Option Orientation : Vertical

Choose the option that offers the correct **synonym** of the highlighted word in the sentence given below. Pay attention to the meaning of the highlighted word in context of the sentence.

Whether you're looking at a big, blousy Moth orchid from the supermarket or a tiny rare Bog orchid on a **remote** Snowdonia hillside, the flowers have the same underlying blueprint.

Options :

1. ✘ an instrument
2. ✔ distant
3. ✘ out dated
4. ✘ retired

Question Number : 51 Question Id : 168000151 Display Question Number : Yes Single Line Question Option : No Option Orientation : Vertical

Choose the option that offers the correct **synonym** of the highlighted word in the sentence given below. Pay attention to the meaning of the highlighted word in context of the sentence.

Whether you're looking at a big, blousy Moth orchid from the supermarket or a tiny rare Bog orchid on a **remote** Snowdonia hillside, the flowers have the same underlying blueprint.

Options :

1. ✘ an instrument
2. ✔ distant
3. ✘ out dated
4. ✘ retired

Question Number : 52 Question Id : 168000152 Display Question Number : Yes Single Line Question Option : No Option Orientation : Vertical

Choose the option that offers the correct **degree of adjective** to fill in the blanks in the sentence given below.

Garima is a \_\_\_\_\_ woman, but Priti is \_\_\_\_\_ than Garima and Puja is the \_\_\_\_\_ woman in the city.

Options :

1. ✘ richer, rich, richest
2. ✔ rich, richer, richest
3. ✘ richest, rich, richer
4. ✘ rich, richest, richest

Question Number : 52 Question Id : 168000152 Display Question Number : Yes Single Line Question Option : No Option Orientation : Vertical

Choose the option that offers the correct **degree of adjective** to fill in the blanks in the sentence given below.

Garima is a \_\_\_\_\_ woman, but Priti is \_\_\_\_\_ than Garima and Puja is the \_\_\_\_\_ woman in the city.

Options :

1. ✘ richer, rich, richest
2. ✔ rich, richer, richest
3. ✘ richest, rich, richer
4. ✘ rich, richest, richest



Question Number : 53 Question Id : 168000153 Display Question Number : Yes Single Line Question Option : No Option Orientation : Vertical

From the options given below, choose the sentence that has the conjunctions used correctly.

Options :

1. ✘ Hardly I had asked the question when I got the correct answer.
2. ✘ Hardly had I asked the question than I got the correct answer.
3. ✔ Hardly had I asked the question when I got the correct answer.
4. ✘ Hardly had I asked the question and I got the correct answer.

Question Number : 53 Question Id : 168000153 Display Question Number : Yes Single Line Question Option : No Option Orientation : Vertical

From the options given below, choose the sentence that has the conjunctions used correctly.

Options :

1. ✘ Hardly I had asked the question when I got the correct answer.
2. ✘ Hardly had I asked the question than I got the correct answer.
3. ✔ Hardly had I asked the question when I got the correct answer.
4. ✘ Hardly had I asked the question and I got the correct answer.

Question Number : 54 Question Id : 168000154 Display Question Number : Yes Single Line Question Option : No Option Orientation : Vertical

From the options given below, choose the correct prepositions to fill in the blanks.

The orchid is one of the biggest families of flowering plants. Many are grown \_\_\_\_\_ their beautiful flowers, while others are \_\_\_\_\_ economic importance, such as being the source \_\_\_\_\_ the food flavouring, vanilla.

Options :

1. ✘ of; of; of
2. ✘ with; of; of
3. ✘ of; with; for
4. ✔ for; of; of

Question Number : 54 Question Id : 168000154 Display Question Number : Yes Single Line Question Option : No Option Orientation : Vertical

From the options given below, choose the correct prepositions to fill in the blanks.

The orchid is one of the biggest families of flowering plants. Many are grown \_\_\_\_\_ their beautiful flowers, while others are \_\_\_\_\_ economic importance, such as being the source \_\_\_\_\_ the food flavouring, vanilla.

Options :

1. ✘ of; of; of
2. ✘ with; of; of
3. ✘ of; with; for
4. ✔ for; of; of

Question Number : 55 Question Id : 168000155 Display Question Number : Yes Single Line Question Option : No Option Orientation : Vertical

From the options given below choose the one that has been spelt correctly to form a proper sentence.

\_\_\_\_\_ are repetitive exercises that use the resistance of our body to build strength, increase flexibility and burn fat.

Options :

1. ✘ Calesthenics
2. ✘ Calisthanics
3. ✔ Calisthenics
4. ✘ Callisthenics

Question Number : 55 Question Id : 168000155 Display Question Number : Yes Single Line Question Option : No Option Orientation : Vertical

From the options given below choose the one that has been spelt correctly to form a proper sentence.

\_\_\_\_\_ are repetitive exercises that use the resistance of our body to build strength, increase flexibility and burn fat.

Options :

1. ✘ Calesthenics
2. ✘ Calisthanics
3. ✔ Calisthenics
4. ✘ Callisthenics

Question Number : 56 Question Id : 168000156 Display Question Number : Yes Single Line Question Option : No Option Orientation : Vertical

निम्नलिखित में से तत्सम शब्द कौन-सा होगा?

Options :

1. ✓ अंधकार
2. ✗ चांद
3. ✗ घर
4. ✗ गांव

Question Number : 56 Question Id : 168000156 Display Question Number : Yes Single Line Question Option : No Option Orientation : Vertical

निम्नलिखित में से तत्सम शब्द कौन-सा होगा?

Options :

1. ✓ अंधकार
2. ✗ चांद
3. ✗ घर
4. ✗ गांव

Question Number : 57 Question Id : 168000157 Display Question Number : Yes Single Line Question Option : No Option Orientation : Vertical

निम्नलिखित में से तद्भव शब्द होगा:

Options :

1. ✗ तपस्वी
2. ✓ दिवाली
3. ✗ भ्रमर
4. ✗ भिक्षुक

Question Number : 57 Question Id : 168000157 Display Question Number : Yes Single Line Question Option : No Option Orientation : Vertical

निम्नलिखित में से तद्भव शब्द होगा:



Options :

1. ✘ तपस्वी
2. ✔ दिवाली
3. ✘ अमर
4. ✘ भिक्षुक

Question Number : 58 Question Id : 168000158 Display Question Number : Yes Single Line Question Option : No Option Orientation : Vertical

शृंगार रस का स्थायी भाव क्या होगा?

Options :

1. ✔ रति
2. ✘ क्रोध
3. ✘ उत्साह
4. ✘ भय

Question Number : 58 Question Id : 168000158 Display Question Number : Yes Single Line Question Option : No Option Orientation : Vertical

शृंगार रस का स्थायी भाव क्या होगा?

Options :

1. ✔ रति
2. ✘ क्रोध
3. ✘ उत्साह
4. ✘ भय

Question Number : 59 Question Id : 168000159 Display Question Number : Yes Single Line Question Option : No Option Orientation : Vertical

‘सदुपयोग’ शब्द का सटीक विलोम होगा:

Options :

1. ✘ नापसंद

2. ✘ कुयोग
3. ✔ दुरूपयोग
4. ✘ विकल्प

Question Number : 59 Question Id : 168000159 Display Question Number : Yes Single Line Question Option : No Option Orientation : Vertical

‘सदुपयोग’ शब्द का सटीक विलोम होगा:

Options :

1. ✘ नापसंद
2. ✘ कुयोग
3. ✔ दुरूपयोग
4. ✘ विकल्प

Question Number : 60 Question Id : 168000160 Display Question Number : Yes Single Line Question Option : No Option Orientation : Vertical

“पायोजी मैंने रामरतन धन पायों।” पंक्ति में अलंकार होगा:

Options :

1. ✔ रूपक
2. ✘ उपमा
3. ✘ अतिशयोक्ति
4. ✘ यमक

Question Number : 60 Question Id : 168000160 Display Question Number : Yes Single Line Question Option : No Option Orientation : Vertical

“पायोजी मैंने रामरतन धन पायों।” पंक्ति में अलंकार होगा:

Options :

1. ✔ रूपक
2. ✘ उपमा

3. ✘ अतिशयोक्ति

4. ✘ यमक

Question Number : 61 Question Id : 168000161 Display Question Number : Yes Single Line Question Option : No Option Orientation : Vertical

'अब पछताए होत क्या जब चिड़िया चुग गयी खेत' लोकोक्ति का सही अर्थ होगा:

Options :

1. ✘ सभी ओर से विपत्ति आना

2. ✘ जान बुझकर लड़ाई मोल लेना

3. ✘ बैठे-बैठे खाना

4. ✔ पहले सावधानी न बरतना बाद में पछताना

Question Number : 61 Question Id : 168000161 Display Question Number : Yes Single Line Question Option : No Option Orientation : Vertical

'अब पछताए होत क्या जब चिड़िया चुग गयी खेत' लोकोक्ति का सही अर्थ होगा:

Options :

1. ✘ सभी ओर से विपत्ति आना

2. ✘ जान बुझकर लड़ाई मोल लेना

3. ✘ बैठे-बैठे खाना

4. ✔ पहले सावधानी न बरतना बाद में पछताना

Question Number : 62 Question Id : 168000162 Display Question Number : Yes Single Line Question Option : No Option Orientation : Vertical

किस वाक्य में अपादान कारक का प्रयोग हुआ है?

Options :

1. ✔ गंगा हिमालय से निकलती है।

2. ✘ राम ने कविता पढ़ी।

3. ✘ मेज पर किताबें रखी थी।
4. ✘ राजा दशरथ की तीन रानियां थी।

Question Number : 62 Question Id : 168000162 Display Question Number : Yes Single Line Question Option : No Option Orientation : Vertical

किस वाक्य में अपादान कारक का प्रयोग हुआ है?

Options :

1. ✔ गंगा हिमालय से निकलती है।
2. ✘ राम ने कविता पढ़ी।
3. ✘ मेज पर किताबें रखी थी।
4. ✘ राजा दशरथ की तीन रानियां थी।

Question Number : 63 Question Id : 168000163 Display Question Number : Yes Single Line Question Option : No Option Orientation : Vertical

बहुत ही अधिक बरसात होने के लिए उपयुक्त शब्द होगा:

Options :

1. ✘ अल्पवृष्टि
2. ✘ ओला वृष्टि
3. ✔ अति वृष्टि
4. ✘ वृष्टि

Question Number : 63 Question Id : 168000163 Display Question Number : Yes Single Line Question Option : No Option Orientation : Vertical

बहुत ही अधिक बरसात होने के लिए उपयुक्त शब्द होगा:

Options :

1. ✘ अल्पवृष्टि
2. ✘ ओला वृष्टि

3. ✓ अति वृष्टि

4. ✗ वृष्टि

Question Number : 64 Question Id : 168000164 Display Question Number : Yes Single Line Question Option : No Option Orientation : Vertical

निम्नलिखित पंक्ति के रेखांकित शब्द में कौन-सा समास है?

हमें 'तुलसीदासकृत' रामायण का पाठ करना चाहिए।

Options :

1. ✗ कर्मधारय समास

2. ✗ द्विगु समास

3. ✓ तत्पुरुष समास

4. ✗ अव्ययीभाव समास

Question Number : 64 Question Id : 168000164 Display Question Number : Yes Single Line Question Option : No Option Orientation : Vertical

निम्नलिखित पंक्ति के रेखांकित शब्द में कौन-सा समास है?

हमें 'तुलसीदासकृत' रामायण का पाठ करना चाहिए।

Options :

1. ✗ कर्मधारय समास

2. ✗ द्विगु समास

3. ✓ तत्पुरुष समास

4. ✗ अव्ययीभाव समास

Question Number : 65 Question Id : 168000165 Display Question Number : Yes Single Line Question Option : No Option Orientation : Vertical

निम्नलिखित वाक्यों में से कौन-सा वाक्य शुद्ध है?

Options :

1. ✗ साहित्य और जीवन का घोर संबंध है।

2. ✓ साहित्य और जीवन का घनिष्ठ संबंध है।
3. ✘ साहित्य का जिवन के साथ घनिष्ठ संबंध है।
4. ✘ साहित्य और जिवन घोर संबंधित है।

Question Number : 65 Question Id : 168000165 Display Question Number : Yes Single Line Question Option : No Option Orientation : Vertical

निम्नलिखित वाक्यों में से कौन-सा वाक्य शुद्ध है?

Options :

1. ✘ साहित्य और जीवन का घोर संबंध है।
2. ✓ साहित्य और जीवन का घनिष्ठ संबंध है।
3. ✘ साहित्य का जिवन के साथ घनिष्ठ संबंध है।
4. ✘ साहित्य और जिवन घोर संबंधित है।

Question Number : 66 Question Id : 168000166 Display Question Number : Yes Single Line Question Option : No Option Orientation : Vertical

The LCM of  $5x^2y^3z^5$  and  $3xy^2z^7$  is:

Options :

1. ✓  $15x^2y^3z^7$
2. ✘  $15x^1y^2z^5$
3. ✘  $5x^2y^3z^7$
4. ✘  $5x^1y^2z^5$

Question Number : 66 Question Id : 168000166 Display Question Number : Yes Single Line Question Option : No Option Orientation : Vertical

$5x^2y^3z^5$  और  $3xy^2z^7$  का लघुत्तम समापवर्तक (ल.स.) है:

Options :



1. ✓  $15x^2y^3z^7$

2. ✗  $15x^1y^2z^5$

3. ✗  $5x^2y^3z^7$

4. ✗  $5x^1y^2z^5$

Question Number : 67 Question Id : 168000167 Display Question Number : Yes Single Line Question Option : No Option Orientation : Vertical

The average age of 3 girls is 25 years and their age is in the ratio 1 : 4 : 10. The age of the youngest girl is:

Options :

1. ✗ 4.5 years

2. ✗ 4 years

3. ✓ 5 years

4. ✗ 5.5 years

Question Number : 67 Question Id : 168000167 Display Question Number : Yes Single Line Question Option : No Option Orientation : Vertical

3 लड़कियों की औसत आयु 25 वर्ष और उनकी आयु का अनुपात 1 : 4 : 10 है। सबसे छोटी लड़की की आयु है:

Options :

1. ✗ 4.5 वर्ष

2. ✗ 4 वर्ष

3. ✓ 5 वर्ष

4. ✗ 5.5 वर्ष

Question Number : 68 Question Id : 168000168 Display Question Number : Yes Single Line Question Option : No Option Orientation : Vertical

A person deposited ₹ 5,000 in a bank for 3 years at a simple interest, which amounted to ₹ 5,975 after 3 years. If the interest had been 3.5 % more, what sum would he have received after 3 years?

Options :

1. ✗ ₹ 6,200

2. ✘ ₹ 6,400

3. ✔ ₹ 6,500

4. ✘ ₹ 6,600

Question Number : 68 Question Id : 168000168 Display Question Number : Yes Single Line Question Option : No Option Orientation : Vertical

एक व्यक्ति एक बैंक में 3 वर्ष के लिए साधारण ब्याज पर ₹ 5,000 जमा करता है, जिसके परिणामस्वरूप 3 वर्ष बाद उसे ₹ 5,975 प्राप्त होते हैं। यदि ब्याज की दर 3.5% अधिक होती, तो 3 वर्ष बाद उसे कितनी धनराशि प्राप्त होगी?

Options :

1. ✘ ₹ 6,200

2. ✘ ₹ 6,400

3. ✔ ₹ 6,500

4. ✘ ₹ 6,600

Question Number : 69 Question Id : 168000169 Display Question Number : Yes Single Line Question Option : No Option Orientation : Vertical

Ramesh spends 80% of his income and gives 15% of the remainder in a charity. He has ₹ 3,910 left with him. What is his income?

Options :

1. ✘ ₹ 78,200

2. ✔ ₹ 23,000

3. ✘ ₹ 23,500

4. ✘ ₹ 78,500

Question Number : 69 Question Id : 168000169 Display Question Number : Yes Single Line Question Option : No Option Orientation : Vertical

रमेश अपने वेतन का 80% व्यय कर देता है और शेष का 15% दान कर देता है। जिसके बाद उसके पास ₹ 3,910 बचते हैं। उसका वेतन कितना है?

Options :

1. ✘ ₹ 78,200

2. ✓ ₹ 23,000

3. ✗ ₹ 23,500

4. ✗ ₹ 78,500

Question Number : 70 Question Id : 168000170 Display Question Number : Yes Single Line Question Option : No Option Orientation : Vertical

The quadratic equation whose roots are the reciprocal of the roots of  $5x^2 - 7x + 8 = 0$  is:

Options :

1. ✓  $8x^2 - 7x + 5 = 0$ 2. ✗  $8x^2 - 7x - 5 = 0$ 3. ✗  $8x^2 + 7x - 5 = 0$ 4. ✗  $8x^2 + 7x + 8 = 0$ 

Question Number : 70 Question Id : 168000170 Display Question Number : Yes Single Line Question Option : No Option Orientation : Vertical

वह द्विघातीय समीकरण जिसके मूल  $5x^2 - 7x + 8 = 0$  के मूल के व्युत्क्रमानुपाती हैं, वह है:

Options :

1. ✓  $8x^2 - 7x + 5 = 0$ 2. ✗  $8x^2 - 7x - 5 = 0$ 3. ✗  $8x^2 + 7x - 5 = 0$ 4. ✗  $8x^2 + 7x + 8 = 0$ 

Question Number : 71 Question Id : 168000171 Display Question Number : Yes Single Line Question Option : No Option Orientation : Vertical

X and Y entered into a business investing ₹ 30,000 & ₹ 20,000 respectively. After 6 months Z joined the business by investing ₹ 40,000. If the annual profit is ₹ 3,36,000, then the share of Z is:

Options :

1. ✗ ₹ 95,000

2. ✗ ₹ 97,000

3. ✘ ₹ 96,500

4. ✔ ₹ 96,000

Question Number : 71 Question Id : 168000171 Display Question Number : Yes Single Line Question Option : No Option Orientation : Vertical

X और Y क्रमशः ₹ 30,000 और ₹ 20,000 का निवेश करके एक व्यवसाय में साझेदार बनते हैं। 6 माह बाद ₹ 40,000 निवेश करके Z भी साझेदार बन जाता है। यदि वार्षिक लाभ ₹ 3,36,000 है, तो Z का हिस्सा ज्ञात कीजिए।

Options :

1. ✘ ₹ 95,000

2. ✘ ₹ 97,000

3. ✘ ₹ 96,500

4. ✔ ₹ 96,000

Question Number : 72 Question Id : 168000172 Display Question Number : Yes Single Line Question Option : No Option Orientation : Vertical

The time taken by a 70 m long train travelling at a speed of 30 Km/hr to pass a electric post on its way is:

Options :

1. ✘ 8.5 sec

2. ✘ 8 sec

3. ✘ 8.3 sec

4. ✔ 8.4 sec

Question Number : 72 Question Id : 168000172 Display Question Number : Yes Single Line Question Option : No Option Orientation : Vertical

70 मीटर लंबी रेलगाड़ी को 30 किमी/घंटे की चाल से चलने पर एक बिजली के खंभे को पार करने में कितना समय लगेगा?

Options :

1. ✘ 8.5 सेकंड

2. ✘ 8 सेकंड

3. ✘ 8.3 सेकंड

## 4. ✓ 8.4 सेकंड

Question Number : 73 Question Id : 168000173 Display Question Number : Yes Single Line Question Option : No Option Orientation : Vertical

Raj is twice as good a craftsman as Kamal and together they finish a task in 29 days. In how many days will Kamal alone finish the work?

Options :

1. ✗ 70 days

2. ✗ 112 days

3. ✓ 87 days

4. ✗ 58 days

Question Number : 73 Question Id : 168000173 Display Question Number : Yes Single Line Question Option : No Option Orientation : Vertical

राज, कमल से दोगुना सक्षम शिल्पकार है, तथा वे मिलकर एक कार्य को 29 दिनों में पूरा करते हैं। कमल अकेले उसी कार्य को कितने दिनों में समाप्त कर सकता है?

Options :

1. ✗ 70 दिन

2. ✗ 112 दिन

3. ✓ 87 दिन

4. ✗ 58 दिन

Question Number : 74 Question Id : 168000174 Display Question Number : Yes Single Line Question Option : No Option Orientation : Vertical

In a container, milk and water are in the ratio of 5 : 3. If 10 L water is added to this mixture, the ratio of milk and water becomes 5 : 6. The quantity of water in the new mixture is:

Options :

1. ✓ 20 litres

2. ✗ 21 litres

3. ✗ 22 litres

4. ✗ 19 litres



Question Number : 74 Question Id : 168000174 Display Question Number : Yes Single Line Question Option : No Option Orientation : Vertical

एक डिब्बे में दूध और पानी का अनुपात 5 : 3 है। यदि इस मिश्रण में 10 लीटर पानी मिला दिया जाता है, तो दूध और पानी का अनुपात 5 : 6 हो जाता है। नये मिश्रण में पानी की मात्रा है:

Options :

1. ✓ 20 लीटर
2. ✗ 21 लीटर
3. ✗ 22 लीटर
4. ✗ 19 लीटर

Question Number : 75 Question Id : 168000175 Display Question Number : Yes Single Line Question Option : No Option Orientation : Vertical

A shopkeeper professes to sell his goods at cost price but uses a false weight instead of 1 kg weight. Thus, he makes a profit of 25%. How much is the false weight?

Options :

1. ✓ 800 g
2. ✗ 200 g
3. ✗ 700 g
4. ✗ 300 g

Question Number : 75 Question Id : 168000175 Display Question Number : Yes Single Line Question Option : No Option Orientation : Vertical

एक दुकानदार अपने सामान को क्रय मूल्य पर बेचने का दावा करता है, लेकिन तोलते समय वह 1 किग्रा के बाट की जगह नकली बाट का प्रयोग करता है। इस प्रकार वह 25% का लाभ अर्जित करता है। नकली बाट का भार कितना है?

Options :

1. ✓ 800 ग्राम
2. ✗ 200 ग्राम
3. ✗ 700 ग्राम
4. ✗ 300 ग्राम



Question Number : 76 Question Id : 168000176 Display Question Number : Yes Single Line Question Option : No Option Orientation : Vertical

A ball of mass 10 kg is moving along a straight line. The time taken by a constant force of 2.0 N to increase the velocity of the ball from 5 m/s to 10 m/s is:

Options :

1. ✓ 25 sec
2. ✗ 50 sec
3. ✗ 75 sec
4. ✗ 100 sec

Question Number : 76 Question Id : 168000176 Display Question Number : Yes Single Line Question Option : No Option Orientation : Vertical

10 किलोग्राम द्रव्यमान की एक गेंद सीधी रेखा में गतिमान है। गेंद की गति को 5 मीटर/सेकंड से बढ़ाकर 10 मीटर/सेकंड करने में 2.0 N (न्यूटन) के निरंतर बल को समय लगेगा:

Options :

1. ✓ 25 सेकंड
2. ✗ 50 सेकंड
3. ✗ 75 सेकंड
4. ✗ 100 सेकंड

Question Number : 77 Question Id : 168000177 Display Question Number : Yes Single Line Question Option : No Option Orientation : Vertical

A bullet of 0.02 kg, moving horizontally with a speed of 84 m/s, hits a 1.2 kg wooden block, which is initially at rest on a smooth frictionless horizontal table. The bullet does not come out of the block. The speed of the block after the collision is close to:

Options :

1. ✗ 0.6 m/s
2. ✓ 1.4 m/s
3. ✗ 32 m/s
4. ✗ 70 m/s

Question Number : 77 Question Id : 168000177 Display Question Number : Yes Single Line Question Option : No Option Orientation : Vertical

0.02 किलोग्राम की एक गोली क्षितिज के समानांतर दिशा में 84 मीटर/सेकंड की गति से 1.2 किलोग्राम के लकड़ी के ब्लॉक में लगती है जो एक घर्षणरहित सपाट क्षितिज मेज पर आरंभतः विश्राम अवस्था में है। गोली ब्लॉक में से बाहर नहीं निकलती है। गोली से टकराने के बाद ब्लॉक की गति लगभग है:

Options :

1. ✘ 0.6 मीटर/सेकंड
2. ✔ 1.4 मीटर/सेकंड
3. ✘ 32 मीटर/सेकंड
4. ✘ 70 मीटर/सेकंड

Question Number : 78 Question Id : 168000178 Display Question Number : Yes Single Line Question Option : No Option Orientation : Vertical

A force acting on an object of mass 12 kg increases its speed from 2 m/s to 6 m/s. The work done by the force is:

Options :

1. ✘ 48 J
2. ✘ 96 J
3. ✘ 144 J
4. ✔ 192 J

Question Number : 78 Question Id : 168000178 Display Question Number : Yes Single Line Question Option : No Option Orientation : Vertical

12 किलोग्राम द्रव्यमान की वस्तु पर कार्य करने वाला बल इसकी गति को 2 मीटर/सेकंड बढ़ाकर 6 मीटर/सेकंड कर देता है। बल द्वारा किया गया कार्य है:

Options :

1. ✘ 48 जूल
2. ✘ 96 जूल
3. ✘ 144 जूल
4. ✔ 192 जूल

Question Number : 79 Question Id : 168000179 Display Question Number : Yes Single Line Question Option : No Option Orientation : Vertical

A ball of mass  $m$  falls from height  $h$  under gravity. Let  $V$  and  $K$  denote the potential and kinetic energy of the ball at height  $x$ . When  $x = 2h/3$ , the ratio  $K/V$  is:

Options :

1. ✘ 1
2. ✔ 1/2
3. ✘ 1/3
4. ✘ 1/4

Question Number : 79 Question Id : 168000179 Display Question Number : Yes Single Line Question Option : No Option Orientation : Vertical

$m$  द्रव्यमान की एक गेंद गुरुत्वाकर्षण बल के तहत  $h$  ऊंचाई से गिरती है। मान लीजिए  $x$  ऊंचाई पर  $V$  और  $K$  स्थितिज ऊर्जा और गतिज ऊर्जा के द्योतक हैं। जब  $x = 2h/3$ , तो  $K/V$  का अनुपात है:

Options :

1. ✘ 1
2. ✔ 1/2
3. ✘ 1/3
4. ✘ 1/4

Question Number : 80 Question Id : 168000180 Display Question Number : Yes Single Line Question Option : No Option Orientation : Vertical

The mass of a planet is  $1/10$  times the mass of Earth and its radius is  $1/4$  the radius of Earth. The acceleration due to gravity near the surface of the planet is about:

Options :

1. ✘  $3.92 \text{ m/s}^2$
2. ✘  $7.84 \text{ m/s}^2$
3. ✘  $11.76 \text{ m/s}^2$
4. ✔  $15.68 \text{ m/s}^2$

Question Number : 80 Question Id : 168000180 Display Question Number : Yes Single Line Question Option : No Option Orientation : Vertical

एक ग्रह का द्रव्यमान पृथ्वी के द्रव्यमान का  $1/10$  गुणा है और इसका अर्धव्यास पृथ्वी के मुकाबले  $1/4$  है। ग्रह की सतह के निकट गुरुत्वाकर्षण बल के कारण त्वरण लगभग है:

Options :

1. ✘ 3.92 मीटर/सेकंड<sup>2</sup>
2. ✘ 7.84 मीटर/सेकंड<sup>2</sup>
3. ✘ 11.76 मीटर/सेकंड<sup>2</sup>
4. ✔ 15.68 मीटर/सेकंड<sup>2</sup>

Question Number : 81 Question Id : 168000181 Display Question Number : Yes Single Line Question Option : No Option Orientation : Vertical

What is the colour of the universal indicator in a strongly basic solution?

Options :

1. ✔ Purple
2. ✘ Yellow
3. ✘ Red
4. ✘ Blue

Question Number : 81 Question Id : 168000181 Display Question Number : Yes Single Line Question Option : No Option Orientation : Vertical

प्रबल क्षारीय विलयन में सार्वत्रिक सूचक का रंग क्या होता है?

Options :

1. ✔ बैंगनी
2. ✘ पीला
3. ✘ लाल
4. ✘ नीला

Question Number : 82 Question Id : 168000182 Display Question Number : Yes Single Line Question Option : No Option Orientation : Vertical

Which one of the following is the salt of sodium hydroxide with nitric acid?

Options :

1. ✘ Na<sub>2</sub>SO<sub>4</sub>

2. ✓  $\text{NaNO}_3$

3. ✗  $\text{Na}_2\text{CO}_3$

4. ✗  $\text{NaCl}$

Question Number : 82 Question Id : 168000182 Display Question Number : Yes Single Line Question Option : No Option Orientation : Vertical

निम्नलिखित में से सोडियम हाइड्रॉक्साइड के साथ नाइट्रिक अम्ल का लवण कौन सा है?

Options :

1. ✗  $\text{Na}_2\text{SO}_4$

2. ✓  $\text{NaNO}_3$

3. ✗  $\text{Na}_2\text{CO}_3$

4. ✗  $\text{NaCl}$

Question Number : 83 Question Id : 168000183 Display Question Number : Yes Single Line Question Option : No Option Orientation : Vertical

The gas released when an active metal like sodium reacts with water is:

Options :

1. ✗ Nitrogen

2. ✗ Hydrogen chloride

3. ✗ Oxygen

4. ✓ Hydrogen

Question Number : 83 Question Id : 168000183 Display Question Number : Yes Single Line Question Option : No Option Orientation : Vertical

जब सोडियम जैसी सक्रिय धातु की अभिक्रिया पानी के साथ करायी जाती है तो कौन सी गैस उत्पन्न होती है?

Options :

1. ✗ नाइट्रोजन

2. ✗ हाइड्रोजन क्लोराइड



3. ✘ ऑक्सीजन

4. ✔ हाइड्रोजन

Question Number : 84 Question Id : 168000184 Display Question Number : Yes Single Line Question Option : No Option Orientation : Vertical

Why is hydrogen gas not released when a metal reacts with nitric acid?

Options :

1. ✔ Nitric acid is an oxidising agent

2. ✘ Nitric acid is a weak acid

3. ✘ Nitric acid is a reducing agent

4. ✘ Nitric acid is insoluble in water

Question Number : 84 Question Id : 168000184 Display Question Number : Yes Single Line Question Option : No Option Orientation : Vertical

किसी धातु की नाइट्रिक अम्ल के साथ अभिक्रिया करने पर हाइड्रोजन गैस उत्पन्न क्यों नहीं होती?

Options :

1. ✔ नाइट्रिक अम्ल एक ऑक्सीकरण कर्मक है।

2. ✘ नाइट्रिक अम्ल दुर्बल अम्ल है।

3. ✘ नाइट्रिक अम्ल अपचायक है।

4. ✘ नाइट्रिक अम्ल पानी में अघुलनशील है।

Question Number : 85 Question Id : 168000185 Display Question Number : Yes Single Line Question Option : No Option Orientation : Vertical

What is the total number of atoms present in 3.2 gram of dioxygen (O<sub>2</sub>)?

Options :

1. ✘  $6.023 \times 10^{23}$

2. ✘  $2 \times 6.023 \times 10^{23}$

3. ✔  $2 \times 6.023 \times 10^{22}$

4. ✘  $6.023 \times 10^{22}$

Question Number : 85 Question Id : 168000185 Display Question Number : Yes Single Line Question Option : No Option Orientation : Vertical

3.2 ग्राम डाइऑक्सीजन ( $O_2$ ) में उपस्थित कुल परमाणुओं की संख्या कितनी होगी?

Options :

1. ✘  $6.023 \times 10^{23}$

2. ✘  $2 \times 6.023 \times 10^{23}$

3. ✔  $2 \times 6.023 \times 10^{22}$

4. ✘  $6.023 \times 10^{22}$

Question Number : 86 Question Id : 168000186 Display Question Number : Yes Single Line Question Option : No Option Orientation : Vertical

According to the Natya Shastra, compiled by Bharat Muni, which of the following is a category of stringed instruments?

Options :

1. ✔ Tata Vadya

2. ✘ Sushira Vadya

3. ✘ Avanaddha Vadya

4. ✘ Ghana Vadya

Question Number : 86 Question Id : 168000186 Display Question Number : Yes Single Line Question Option : No Option Orientation : Vertical

भरत मुनि द्वारा संकलित नाट्य शास्त्र के अनुसार निम्नलिखित में से कौन सा वाद्य तार-वाद्यों की श्रेणी में आता है?

Options :

1. ✔ तत वाद्य

2. ✘ सुषिर वाद्य

3. ✘ अवनद्ध वाद्य



4. ✘ घन वाद्य

Question Number : 87 Question Id : 168000187 Display Question Number : Yes Single Line Question Option : No Option Orientation : Vertical

Which of the following Viceroy's of India was instrumental in the partition of Bengal in 1905?

Options :

1. ✘ Lord Mountbatten
2. ✔ Lord Curzon
3. ✘ Lord Canning
4. ✘ Lord Irwin

Question Number : 87 Question Id : 168000187 Display Question Number : Yes Single Line Question Option : No Option Orientation : Vertical

निम्नलिखित में से भारत का कौन-सा वायसराय 1905 में बंगाल विभाजन (बंग-भंग) के लिए जिम्मेदार था?

Options :

1. ✘ लॉर्ड माउंटबेटन
2. ✔ लॉर्ड कर्जन
3. ✘ लॉर्ड कैनिंग
4. ✘ लॉर्ड इरविन

Question Number : 88 Question Id : 168000188 Display Question Number : Yes Single Line Question Option : No Option Orientation : Vertical

Which of the following famous monuments is **NOT** in Delhi?

Options :

1. ✘ Red Fort
2. ✘ Qutab Minar
3. ✔ Char Minar
4. ✘ Tomb of Safdarjang

Question Number : 88 Question Id : 168000188 Display Question Number : Yes Single Line Question Option : No Option Orientation : Vertical

निम्नलिखित में से कौन-सा प्रसिद्ध स्मारक दिल्ली में नहीं है?

Options :

1. ✘ लाल किला
2. ✘ कुतुब मीनार
3. ✔ चार मीनार
4. ✘ सफ़दरजंग का मकबरा

Question Number : 89 Question Id : 168000189 Display Question Number : Yes Single Line Question Option : No Option Orientation : Vertical

As per discussions in the GST Council Meeting held on 18th May, 2017, GST rate for butter and other fats (ghee, butter oil, etc. and oils derived from milk) is:

Options :

1. ✔ 12%
2. ✘ 0% (Nil)
3. ✘ 28%
4. ✘ 18%

Question Number : 89 Question Id : 168000189 Display Question Number : Yes Single Line Question Option : No Option Orientation : Vertical

18 मई 2017 को आयोजित जीएसटी परिषद की बैठक में हुई चर्चा के अनुसार मक्खन और दूध से प्राप्त अन्य वसाओं (घी, मक्खनीय तेल, आदि और तेलों) के लिए जीएसटी दर है:

Options :

1. ✔ 12%
2. ✘ 0% (शून्य)
3. ✘ 28%
4. ✘ 18%

Question Number : 90 Question Id : 168000190 Display Question Number : Yes Single Line Question Option : No Option Orientation : Vertical

Which article of the Indian Constitution explains in detail the Right to Education?

Options :

1. ✘ Article 26
2. ✘ Article 14
3. ✔ Article 21A
4. ✘ Article 51A

Question Number : 90 Question Id : 168000190 Display Question Number : Yes Single Line Question Option : No Option Orientation : Vertical

भारतीय संविधान का कौन-सा अनुच्छेद शिक्षा के अधिकार का विस्तृत वर्णन करता है?

Options :

1. ✘ अनुच्छेद 26
2. ✘ अनुच्छेद 14
3. ✔ अनुच्छेद 21A
4. ✘ अनुच्छेद 51A

Question Number : 91 Question Id : 168000191 Display Question Number : Yes Single Line Question Option : No Option Orientation : Vertical

Which of the following elements was discovered by Marie Curie?

Options :

1. ✘ Strontium
2. ✘ Barium
3. ✔ Polonium
4. ✘ Rubidium

Question Number : 91 Question Id : 168000191 Display Question Number : Yes Single Line Question Option : No Option Orientation : Vertical

मैरी क्यूरी द्वारा निम्नलिखित में से किस तत्व की खोज की गई थी?

Options :

1. ✘ स्ट्रॉन्टियम

2. ✘ बेरियम
3. ✔ पोलोनियम
4. ✘ रूबिडियम

Question Number : 92 Question Id : 168000192 Display Question Number : Yes Single Line Question Option : No Option Orientation : Vertical

In which of the following categories was Tyehimba Jess awarded the Pulitzer Prize 2017?

Options :

1. ✘ Fiction
2. ✔ Poetry
3. ✘ History
4. ✘ Drama

Question Number : 92 Question Id : 168000192 Display Question Number : Yes Single Line Question Option : No Option Orientation : Vertical

निम्नलिखित में से किस श्रेणी में तेहिम्बा जेस को 2017 के पुलित्ज़र पुरस्कार से सम्मानित किया गया था?

Options :

1. ✘ उपन्यास (फ़िक्शन)
2. ✔ कविता
3. ✘ इतिहास
4. ✘ नाटक

Question Number : 93 Question Id : 168000193 Display Question Number : Yes Single Line Question Option : No Option Orientation : Vertical

In which of the following sport did Apurvi Chandela represent India in Glasgow 2014 XX Commonwealth Games?

Options :

1. ✔ Shooting
2. ✘ Swimming
3. ✘ Weightlifting

## 4. ✘ Squash

Question Number : 93 Question Id : 168000193 Display Question Number : Yes Single Line Question Option : No Option Orientation : Vertical

निम्नलिखित में से किस खेल में अपूर्वी चंदेला ने ग्लासगो 2014 बीसवें कॉमनवेल्थ गेम्स में भारत का प्रतिनिधित्व किया था?

Options :

1. ✔ निशानेबाज़ी
2. ✘ तैराकी
3. ✘ भारोत्तोलन
4. ✘ स्क्वाश

Question Number : 94 Question Id : 168000194 Display Question Number : Yes Single Line Question Option : No Option Orientation : Vertical

In which of the following disciplines was the Dronacharya Awards 2017 conferred on Brij Bhushan Mohanty?

Options :

1. ✔ Boxing
2. ✘ Shooting
3. ✘ Wrestling
4. ✘ Hockey

Question Number : 94 Question Id : 168000194 Display Question Number : Yes Single Line Question Option : No Option Orientation : Vertical

बृज भूषण मोहंती को 2017 में निम्नलिखित में से किस क्षेत्र के लिए द्रोणाचार्य पुरस्कार से सम्मानित किया गया था?

Options :

1. ✔ मुक्केबाज़ी
2. ✘ निशानेबाज़ी
3. ✘ कुश्ती
4. ✘ हॉकी



Question Number : 95 Question Id : 168000195 Display Question Number : Yes Single Line Question Option : No Option Orientation : Vertical

In 2016, which of the following Bharatnatyam and Kuchipudi dancer was awarded the Padma Vibhushan?

Options :

1. ✘ Girija Devi
2. ✔ Yamini Krishnamurti
3. ✘ Padma Subrahmanyam
4. ✘ Shanta Dhananjayan

Question Number : 95 Question Id : 168000195 Display Question Number : Yes Single Line Question Option : No Option Orientation : Vertical

2016 में निम्नलिखित में से किस भरतनाट्यम और कुचीपुडी नर्तकी को पद्म विभूषण से सम्मानित किया गया?

Options :

1. ✘ गिरिजा देवी
2. ✔ यामिनी कृष्णमूर्ति
3. ✘ पद्मा सुब्रमण्यम
4. ✘ शांता धनंजयन

Question Number : 96 Question Id : 168000196 Display Question Number : Yes Single Line Question Option : No Option Orientation : Vertical

Find the odd one out.

Options :

1. ✘ ACUaR
2. ✔ LNSrT
3. ✘ XTLiV
4. ✘ XMVeT

Question Number : 96 Question Id : 168000196 Display Question Number : Yes Single Line Question Option : No Option Orientation : Vertical



इनमें से विषम का चयन करें।

Options :

1. ✘ ACUaR
2. ✔ LNSrT
3. ✘ XTLiV
4. ✘ XMVeT

Question Number : 97 Question Id : 168000197 Display Question Number : Yes Single Line Question Option : No Option Orientation : Vertical

Complete the analogy.

Bhagavat Gita : Hindu :: ?

Options :

1. ✘ Mosque : Muslim
2. ✔ Bible : Christian
3. ✘ Guru : Sikh
4. ✘ Sadhu : Ashram

Question Number : 97 Question Id : 168000197 Display Question Number : Yes Single Line Question Option : No Option Orientation : Vertical

सादृश्य को पूरा करें।

भगवत् गीता : हिंदू :: ?

Options :

1. ✘ मस्जिद : मुस्लिम
2. ✔ बाइबल : ईसाई
3. ✘ गुरु : सिख
4. ✘ साधु : आश्रम

Question Number : 98 Question Id : 168000198 Display Question Number : Yes Single Line Question Option : No Option Orientation : Vertical

Select the word having similar meaning as that of the words on the right and left side of the brackets.  
PUNISH (----) NICE

Options :

1. ✘ NEAT
2. ✘ TIME
3. ✘ GOOD
4. ✔ FINE

Question Number : 98 Question Id : 168000198 Display Question Number : Yes Single Line Question Option : No Option Orientation : Vertical

ऐसे शब्द का चयन करें जिसका अर्थ कोष्ठक के दाहिनी तथा बाईं ओर के शब्दों के अर्थ के समान हो।

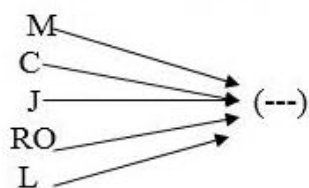
PUNISH (----) NICE

Options :

1. ✘ NEAT
2. ✘ TIME
3. ✘ GOOD
4. ✔ FINE

Question Number : 99 Question Id : 168000199 Display Question Number : Yes Single Line Question Option : No Option Orientation : Vertical

Which of the following options, when prefixed by each letter/set of letters in the image, forms a meaningful word?

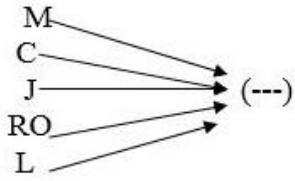


Options :

1. ✘ EET
2. ✘ ATE
3. ✔ UTE
4. ✘ IER

Question Number : 99 Question Id : 168000199 Display Question Number : Yes Single Line Question Option : No Option Orientation : Vertical

निम्नलिखित में से कौन-सा ऐसा विकल्प है जिसमें एक उपसर्ग के रूप में जोड़े जाने पर चित्र में दिखाया गया प्रत्येक अक्षर/अक्षर-युग्म एक सार्थक अंग्रेज़ी शब्द बनाता है?



Options :

1. ✘ EET
2. ✘ ATE
3. ✔ UTE
4. ✘ IER

Question Number : 100 Question Id : 168000200 Display Question Number : Yes Single Line Question Option : No Option Orientation : Vertical

Select the missing number in the series.

13, 27, 56, 115, 234, \_\_\_\_\_

Options :

1. ✘ 324
2. ✘ 423
3. ✔ 473
4. ✘ 437

Question Number : 100 Question Id : 168000200 Display Question Number : Yes Single Line Question Option : No Option Orientation : Vertical

श्रृंखला की अगली संख्या का पता लगाएं।

13, 27, 56, 115, 234, \_\_\_\_\_

Options :

1. ✘ 324
2. ✘ 423
3. ✔ 473

4. ✖ 437