

Haryana Staff Selection Commission

Notations :

1. Options shown in green color and with ✓ icon are correct.
2. Options shown in red color and with ✗ icon are incorrect.

Subject Name:	CAT 4 Junior Scale Stenographer English CBT Exam
Total Marks:	200
Display Marks:	Yes
Calculator:	None
Magnifying Glass Required?:	No
Ruler Required?:	No
Eraser Required?:	No
Scratch Pad Required?:	No
Rough Sketch/Notepad Required?:	No
Protractor Required?:	No

CAT 4 Junior Scale Stenographer English CBT Exam

Group Marks: 200

CAT 4 Junior Scale Stenographer English CBT Exam

Section Marks:	200
Display Number Panel:	Yes
Group All Questions:	No

Question Number : 1 Question Id : 260269101 Display Question Number : Yes Single Line Question Option : No Option Orientation : Vertical

Hansi served as the capital of the territories acquired by:

Options :

1. ✗ Begum Samru
2. ✓ George Thomas
3. ✗ Ghulam Qadir
4. ✗ Hasan Khan Mewati

Question Number : 1 Question Id : 260269101 Display Question Number : Yes Single Line Question Option : No Option Orientation : Vertical

हांसी किसके द्वारा अधिग्रहीत प्रदेशों की राजधानी थी?

Options :

1. ✘ बेगम समरू
2. ✔ जॉर्ज थॉमस
3. ✘ गुलाम कादिर
4. ✘ हसन खान मेवाती

Question Number : 2 Question Id : 260269102 Display Question Number : Yes Single Line Question Option : No Option Orientation : Vertical

The personal allowance of Shah Alam was raised by British East India Company from the land known as:

Options :

1. ✘ Ahirwal
2. ✔ Assigned Territory
3. ✘ Mewat
4. ✘ Shekhawati

Question Number : 2 Question Id : 260269102 Display Question Number : Yes Single Line Question Option : No Option Orientation : Vertical

ब्रिटिश ईस्ट इंडिया कंपनी द्वारा शाह आलम को जिस भूमि से निजी भत्ता प्रदान किया जाता था, उसे क्या कहते थे?

Options :

1. ✘ अहीरवाल
2. ✔ नियत क्षेत्र
3. ✘ मेवात
4. ✘ शेखावाटी

Question Number : 3 Question Id : 260269103 Display Question Number : Yes Single Line Question Option : No Option Orientation : Vertical

Who among the following was responsible for the restoration of the Old Firozshah Canal?

Options :

1. ✓ Charles Metcalfe
2. ✗ Dalhousie
3. ✗ John Lawrence
4. ✗ Seton

Question Number : 3 Question Id : 260269103 Display Question Number : Yes Single Line Question Option : No Option Orientation : Vertical

पुरानी फिरोजशाह नहर की मरम्मत के लिए निम्नलिखित में से कौन उत्तरदायी था?

Options :

1. ✓ चार्ल्स मेटकॉफ
2. ✗ डलहौजी
3. ✗ जॉन लॉरेंस
4. ✗ सेटॉन

Question Number : 4 Question Id : 260269104 Display Question Number : Yes Single Line Question Option : No Option Orientation : Vertical

Tafzal Hussain's actions in 1857's revolt were mainly focused in:

Options :

1. ✗ Ambala
2. ✗ Gurugram
3. ✗ Jind
4. ✓ Rohtak

Question Number : 4 Question Id : 260269104 Display Question Number : Yes Single Line Question Option : No Option Orientation : Vertical

सन 1857 के विद्रोह में तफज़ल हुसैन का अभियान मुख्य रूप से कहां पर केंद्रित था?

Options :

1. ✗ अंबाला

2. ✘ गुरुग्राम

3. ✘ जींद

4. ✔ रोहतक

Question Number : 5 Question Id : 260269105 Display Question Number : Yes Single Line Question Option : No Option Orientation : Vertical

The Theme State for 31st Surajkund International Crafts Mela was:

Options :

1. ✘ Jammu and Kashmir

2. ✘ Gujarat

3. ✘ Uttar Pradesh

4. ✔ Jharkhand

Question Number : 5 Question Id : 260269105 Display Question Number : Yes Single Line Question Option : No Option Orientation : Vertical

31 वें सूरजकुंड अंतर्राष्ट्रीय शिल्प मेले का थीम स्टेट (विषय) था:

Options :

1. ✘ जम्मू और कश्मीर

2. ✘ गुजरात

3. ✘ उत्तर प्रदेश

4. ✔ झारखण्ड

Question Number : 6 Question Id : 260269106 Display Question Number : Yes Single Line Question Option : No Option Orientation : Vertical

Swachh Shakti Saptah, a programme by the Union Government to recognise the role of women in the Swachh Bharat mission, was launched in the _____ district of Haryana.

Options :

1. ✘ Karnal

2. ✘ Sonapat

3. ✓ Gurugram

4. ✗ Faridabad

Question Number : 6 Question Id : 260269106 Display Question Number : Yes Single Line Question Option : No Option Orientation : Vertical

स्वच्छ भारत अभियान में महिलाओं की भूमिका को स्वीकारने के लिए केंद्र सरकार द्वारा स्वच्छ शक्ति सप्ताह कार्यक्रम हरियाणा के _____ जिले में प्रारंभ किया गया था।

Options :

1. ✗ करनाल

2. ✗ सोनीपत

3. ✓ गुरुग्राम

4. ✗ फ़रीदाबाद

Question Number : 7 Question Id : 260269107 Display Question Number : Yes Single Line Question Option : No Option Orientation : Vertical

The 1st Haryana Sahitya Sangam was inaugurated by _____.

Options :

1. ✗ Captain Abhimanyu

2. ✗ Kaptan Singh Solanki

3. ✓ Manohar Lal Khattar

4. ✗ Narendra Modi

Question Number : 7 Question Id : 260269107 Display Question Number : Yes Single Line Question Option : No Option Orientation : Vertical

पहले हरियाणा साहित्य संगम का उद्घाटन _____ ने किया था।

Options :

1. ✗ कप्तान अभिमन्यु

2. ✗ कप्तान सिंह सोलंकी

3. ✓ मनोहर लाल खट्टर

4. ✘ नरेंद्र मोदी

Question Number : 8 Question Id : 260269108 Display Question Number : Yes Single Line Question Option : No Option Orientation : Vertical

Haryana recently became the _____ Open Defecation Free (ODF) state in India.

Options :

1. ✔ 5th

2. ✘ 6th

3. ✘ 3rd

4. ✘ 2nd

Question Number : 8 Question Id : 260269108 Display Question Number : Yes Single Line Question Option : No Option Orientation : Vertical

हाल ही में हरियाणा भारत का _____ खुले में शौच मुक्त (ओडीएफ) राज्य बन गया है।

Options :

1. ✔ पाँचवाँ

2. ✘ छठवाँ

3. ✘ तीसरा

4. ✘ दूसरा

Question Number : 9 Question Id : 260269109 Display Question Number : Yes Single Line Question Option : No Option Orientation : Vertical

“Roobaiyaat” was written by:

Options :

1. ✔ Khwaja Altaf Hussain Haali

2. ✘ Hussain Baksh

3. ✘ Muhammed Afzal

4. ✘ Sannat Sadullah

Question Number : 9 Question Id : 260269109 Display Question Number : Yes Single Line Question Option : No Option Orientation : Vertical

'रुबाइयात' के रचयिता हैं:

Options :

1. ✓ ख्वाजा अल्ताफ हुसैन हाली
2. ✗ हुसैन बख्श
3. ✗ मुहम्मद अफजल
4. ✗ सन्नत सौदुल्ला

Question Number : 10 Question Id : 260269110 Display Question Number : Yes Single Line Question Option : No Option Orientation : Vertical

Who among the following was the first to be honoured as the State Poet of Urdu in Haryana?

Options :

1. ✓ Anupchand Aftab
2. ✗ Sannat Sadulla
3. ✗ Sheikh Bahauddin Chishti
4. ✗ Sheikh Abdul Qaboos

Question Number : 10 Question Id : 260269110 Display Question Number : Yes Single Line Question Option : No Option Orientation : Vertical

निम्न में से किसे हरियाणा में उर्दू के सबसे पहले राज्य कवि की उपाधि से सम्मानित किया गया था?

Options :

1. ✓ अनूपचंद आफ़ताब
2. ✗ सन्नत सौदुल्ला
3. ✗ शेख बहाउद्दीन चिश्ती
4. ✗ शेख अब्दुल क़बूस

Question Number : 11 Question Id : 260269111 Display Question Number : Yes Single Line Question Option : No Option Orientation : Vertical

'Yuddha Charita' was written by:

Options :

1. ✓ Khushiram Sharma
2. ✗ Bhai Parmanand
3. ✗ Bastiram
4. ✗ Rajaram

Question Number : 11 Question Id : 260269111 Display Question Number : Yes Single Line Question Option : No Option Orientation : Vertical

'युद्ध चरित' के रचयिता हैं:

Options :

1. ✓ खुशीराम शर्मा
2. ✗ भाई परमानंद
3. ✗ बस्तीराम
4. ✗ राजाराम

Question Number : 12 Question Id : 260269112 Display Question Number : Yes Single Line Question Option : No Option Orientation : Vertical

What percentage does Haryana constitute as far as the total area of the country is concerned?

Options :

1. ✓ 1.3%
2. ✗ 2.5%
3. ✗ 3.8%
4. ✗ 4.2%

Question Number : 12 Question Id : 260269112 Display Question Number : Yes Single Line Question Option : No Option Orientation : Vertical

देश के कुल क्षेत्रफल के संबंध में हरियाणा का क्षेत्रफल कितना प्रतिशत है?

Options :

1. ✓ 1.3%

2. ✘ 2.5%

3. ✘ 3.8%

4. ✘ 4.2%

Question Number : 13 Question Id : 260269113 Display Question Number : Yes Single Line Question Option : No Option Orientation : Vertical

The height of the Aravallis in Haryana varies from:

Options :

1. ✔ 200 to 500 metres

2. ✘ 400 to 700 metres

3. ✘ 600 to 800 metres

4. ✘ 750 to 900 metres

Question Number : 13 Question Id : 260269113 Display Question Number : Yes Single Line Question Option : No Option Orientation : Vertical

हरियाणा में अरावली पर्वत की ऊंचाई है:

Options :

1. ✔ 200 से 500 मीटर

2. ✘ 400 से 700 मीटर

3. ✘ 600 से 800 मीटर

4. ✘ 750 से 900 मीटर

Question Number : 14 Question Id : 260269114 Display Question Number : Yes Single Line Question Option : No Option Orientation : Vertical

Which is Haryana's main seasonal river?

Options :

1. ✘ Saraswati

2. ✘ Yamuna

3. ✔ Ghaggar

4. ✘ Markanda

Question Number : 14 Question Id : 260269114 Display Question Number : Yes Single Line Question Option : No Option Orientation : Vertical

हरियाणा की मुख्य मौसमी नदी कौन सी है?

Options :

1. ✘ सरस्वती

2. ✘ यमुना

3. ✔ घग्गर

4. ✘ मार्कंडा

Question Number : 15 Question Id : 260269115 Display Question Number : Yes Single Line Question Option : No Option Orientation : Vertical

In the Rajiv Gandhi government, who served as the union cabinet minister and held various portfolios including agriculture, and environment and forest?

Options :

1. ✘ Bansi Lal

2. ✘ O.P. Chautala

3. ✔ Bhajan Lal

4. ✘ Hukum Singh

Question Number : 15 Question Id : 260269115 Display Question Number : Yes Single Line Question Option : No Option Orientation : Vertical

राजीव गांधी सरकार में, निम्नलिखित में से कौन केंद्रीय कैबिनेट मंत्री के रूप में कार्यरत थे और जिन्हें कृषि, पर्यावरण और वन सहित विभिन्न विभागों का कार्यभार सौंपा गया था?

Options :

1. ✘ बंसी लाल

2. ✘ ओ.पी. चौटाला

3. ✔ भजन लाल

4. ✘ हुकुम सिंह

Question Number : 16 Question Id : 260269116 Display Question Number : Yes Single Line Question Option : No Option Orientation : Vertical

A total of 1,351 candidates, of which _____ were women, contested for the 90 seats, the highest number of women candidates in Haryana assembly elections since its formation in 1966.

Options :

1. ✘ 110
2. ✔ 116
3. ✘ 119
4. ✘ 126

Question Number : 16 Question Id : 260269116 Display Question Number : Yes Single Line Question Option : No Option Orientation : Vertical

कुल 1,351 उम्मीदवार, जिसमें से _____ महिलाये थी, 90 सीटों के लिए चुनाव लड़े। यह 1966 में हरियाणा राज्य के गठन के बाद किसी भी विधानसभा चुनाव में सबसे ज्यादा महिला उम्मीदवारों की संख्या थी।

Options :

1. ✘ 110
2. ✔ 116
3. ✘ 119
4. ✘ 126

Question Number : 17 Question Id : 260269117 Display Question Number : Yes Single Line Question Option : No Option Orientation : Vertical

Which of the following districts is not in the Hissar administrative division?

Options :

1. ✔ Rewari
2. ✘ Fatehabad
3. ✘ Jind
4. ✘ Sirsa

Question Number : 17 Question Id : 260269117 Display Question Number : Yes Single Line Question Option : No Option Orientation : Vertical

निम्नलिखित में से कौन सा जिला हिसार प्रशासनिक मंडल में शामिल नहीं है?

Options :

1. ✓ रेवाड़ी

2. ✗ फतेहाबाद

3. ✗ जींद

4. ✗ सिरसा

Question Number : 18 Question Id : 260269118 Display Question Number : Yes Single Line Question Option : No Option Orientation : Vertical

In the state assembly elections that took place in Haryana in 1967, _____ emerged as the winning party only to rule for about 224 days.

Options :

1. ✗ Bharatiya Lok Dal

2. ✗ Haryana Vikas Party

3. ✓ Vishal Haryana Party

4. ✗ Janata Party

Question Number : 18 Question Id : 260269118 Display Question Number : Yes Single Line Question Option : No Option Orientation : Vertical

वर्ष 1967 में हरियाणा में हुए राज्य विधानसभा चुनावों में, _____ केवल 224 दिन शासन करने के लिए जीतने वाली पार्टी के रूप में उभरी थी।

Options :

1. ✗ भारतीय लोक दल

2. ✗ हरियाणा विकास पार्टी

3. ✓ विशाल हरियाणा पार्टी

4. ✗ जनता पार्टी

Question Number : 19 Question Id : 260269119 Display Question Number : Yes Single Line Question Option : No Option Orientation : Vertical

Which of the following is located at Ban Santour in Yamunanagar district?

Options :

1. ✓ Elephant Rehabilitation and Research Centre
2. ✘ Conservation and Breeding Centre for Peafowl and Chinkara
3. ✘ Vulture Conservation Breeding Centre
4. ✘ Pheasant Breeding Centre

Question Number : 19 Question Id : 260269119 Display Question Number : Yes Single Line Question Option : No Option Orientation : Vertical

यमुनानगर जिले के बन संतूर में निम्नलिखित में से क्या स्थित है?

Options :

1. ✓ हाथी पुनर्वास और अनुसंधान केंद्र
2. ✘ मोर व चिंकारा संरक्षण और प्रजनन केंद्र
3. ✘ गिद्ध संरक्षण प्रजनन केंद्र
4. ✘ तीतर प्रजनन केंद्र

Question Number : 20 Question Id : 260269120 Display Question Number : Yes Single Line Question Option : No Option Orientation : Vertical

The population growth rate of Haryana during the period 2001 to 2011 as per the 2011 census was _____.

Options :

1. ✓ 19.90%
2. ✘ 15.01%
3. ✘ 12.70%
4. ✘ 10.50%

Question Number : 20 Question Id : 260269120 Display Question Number : Yes Single Line Question Option : No Option Orientation : Vertical

2011 की जनगणना के अनुसार 2001 से 2011 की अवधि के दौरान हरियाणा की जनसंख्या वृद्धि दर _____ थी।

Options :

1. ✓ 19.90%

2. ✘ 15.01%

3. ✘ 12.70%

4. ✘ 10.50%

Question Number : 21 Question Id : 260269121 Display Question Number : Yes Single Line Question Option : No Option Orientation : Vertical

_____ is NOT a major source of pollution discharging into the river Ghaggar.

Options :

1. ✔ Arsenic contamination of ground water

2. ✘ Sukhna Nalla (Parwanoo)

3. ✘ Seasonal rivulet at Pinjore, Kalka

4. ✘ Industrial effluent of Dera Bassi

Question Number : 21 Question Id : 260269121 Display Question Number : Yes Single Line Question Option : No Option Orientation : Vertical

निम्नलिखित में से _____ घग्गर नदी में प्रदूषण निर्वहन का एक प्रमुख स्रोत नहीं है।

Options :

1. ✔ भूजल का आर्सेनिक प्रदूषण

2. ✘ सुखना नाला (परवानु)

3. ✘ पिंजौर, कालका की मौसमी छोटी नदी

4. ✘ डेरा बस्सी का औद्योगिक प्रवाह

Question Number : 22 Question Id : 260269122 Display Question Number : Yes Single Line Question Option : No Option Orientation : Vertical

In Haryana, the Mango Fair is celebrated in the month of:

Options :

1. ✔ July

2. ✘ September

3. ✘ March

4. ✘ April

Question Number : 22 Question Id : 260269122 Display Question Number : Yes Single Line Question Option : No Option Orientation : Vertical

हरियाणा में, आम मेला (मेंगो फेयर) किस महीने में मनाया जाता है?

Options :

1. ✔ जुलाई

2. ✘ सितंबर

3. ✘ मार्च

4. ✘ अप्रैल

Question Number : 23 Question Id : 260269123 Display Question Number : Yes Single Line Question Option : No Option Orientation : Vertical

In Haryana, the Masani fair is celebrated to worship:

Options :

1. ✘ The Goddess of wealth

2. ✔ The Goddess of small-pox

3. ✘ Lord Vishnu

4. ✘ Lord Krishna

Question Number : 23 Question Id : 260269123 Display Question Number : Yes Single Line Question Option : No Option Orientation : Vertical

हरियाणा में मसानी मेला किसकी पूजा के लिए मनाया जाता है?

Options :

1. ✘ धन की देवी

2. ✔ चेचक की देवी

3. ✘ भगवान विष्णु

4. ✘ भगवान कृष्ण

Question Number : 24 Question Id : 260269124 Display Question Number : Yes Single Line Question Option : No Option Orientation : Vertical

Sannehit Sarovar is located in:

Options :

1. ✘ Faridabad

2. ✘ Ambala

3. ✔ Kurukshetra

4. ✘ Panipat

Question Number : 24 Question Id : 260269124 Display Question Number : Yes Single Line Question Option : No Option Orientation : Vertical

सान्नेहित सरोवर कहाँ स्थित है?

Options :

1. ✘ फ़रीदाबाद

2. ✘ अंबाला

3. ✔ कुरुक्षेत्र

4. ✘ पानीपत

Question Number : 25 Question Id : 260269125 Display Question Number : Yes Single Line Question Option : No Option Orientation : Vertical

In Haryana, Baisakhi is celebrated in:

Options :

1. ✘ February

2. ✘ May

3. ✘ March

4. ✔ April

Question Number : 25 Question Id : 260269125 Display Question Number : Yes Single Line Question Option : No Option Orientation : Vertical

हरियाणा में, बैसाखी कब मनाई जाती है?

Options :

1. ✘ फ़रवरी
2. ✘ मई
3. ✘ मार्च
4. ✔ अप्रैल

Question Number : 26 Question Id : 260269126 Display Question Number : Yes Single Line Question Option : No Option Orientation : Vertical

Stroke _____ represents the short form 'care'.

Options :

1. ✘ K
2. ✔ Kr
3. ✘ Cr
4. ✘ C

Question Number : 26 Question Id : 260269126 Display Question Number : Yes Single Line Question Option : No Option Orientation : Vertical

Stroke _____ represents the short form 'care'.

Options :

1. ✘ K
2. ✔ Kr
3. ✘ Cr
4. ✘ C

Question Number : 27 Question Id : 260269127 Display Question Number : Yes Single Line Question Option : No Option Orientation : Vertical

In words of one syllable, a _____ stroke is generally halved to indicate a following 'd'.

Options :

1. ✓ Heavy

2. ✗ Doubled

3. ✗ Halved

4. ✗ Light

Question Number : 27 Question Id : 260269127 Display Question Number : Yes Single Line Question Option : No Option Orientation : Vertical

In words of one syllable, a _____ stroke is generally halved to indicate a following 'd'.

Options :

1. ✓ Heavy

2. ✗ Doubled

3. ✗ Halved

4. ✗ Light

Question Number : 28 Question Id : 260269128 Display Question Number : Yes Single Line Question Option : No Option Orientation : Vertical

A right semi-circle represents w followed by a _____ vowel in words like 'woodwork'.

Options :

1. ✓ Dash

2. ✗ End

3. ✗ Diphone

4. ✗ Diphthong

Question Number : 28 Question Id : 260269128 Display Question Number : Yes Single Line Question Option : No Option Orientation : Vertical

A right semi-circle represents w followed by a _____ vowel in words like 'woodwork'.

Options :

1. ✓ Dash

2. ✗ End

3. ✘ Diphone

4. ✘ Diphthong

Question Number : 29 Question Id : 260269129 Display Question Number : Yes Single Line Question Option : No Option Orientation : Vertical

A/an _____ r is used before j.

Options :

1. ✘ Curved

2. ✘ Downward

3. ✔ Upward

4. ✘ Horizontal

Question Number : 29 Question Id : 260269129 Display Question Number : Yes Single Line Question Option : No Option Orientation : Vertical

A/an _____ r is used before j.

Options :

1. ✘ Curved

2. ✘ Downward

3. ✔ Upward

4. ✘ Horizontal

Question Number : 30 Question Id : 260269130 Display Question Number : Yes Single Line Question Option : No Option Orientation : Vertical

The word "occupy" is written _____ the line.

Options :

1. ✔ Above

2. ✘ On

3. ✘ Through

4. ✘ Under

Question Number : 30 Question Id : 260269130 Display Question Number : Yes Single Line Question Option : No Option Orientation : Vertical

The word "occupy" is written _____ the line.

Options :

1. ✓ Above

2. ✗ On

3. ✗ Through

4. ✗ Under

Question Number : 31 Question Id : 260269131 Display Question Number : Yes Single Line Question Option : No Option Orientation : Vertical

The st loop is not used when a _____ occurs between s and t.

Options :

1. ✗ Stroke

2. ✓ Vowel

3. ✗ Loop

4. ✗ Circle

Question Number : 31 Question Id : 260269131 Display Question Number : Yes Single Line Question Option : No Option Orientation : Vertical

The st loop is not used when a _____ occurs between s and t.

Options :

1. ✗ Stroke

2. ✓ Vowel

3. ✗ Loop

4. ✗ Circle

Question Number : 32 Question Id : 260269132 Display Question Number : Yes Single Line Question Option : No Option Orientation : Vertical

We do not use rt and rts standing alone as to avoid confusion with _____.

Options :

1. ✗ Should

2. ✘ Of

3. ✔ And

4. ✘ To

Question Number : 32 Question Id : 260269132 Display Question Number : Yes Single Line Question Option : No Option Orientation : Vertical

We do not use rt and rts standing alone as to avoid confusion with _____.

Options :

1. ✘ Should

2. ✘ Of

3. ✔ And

4. ✘ To

Question Number : 33 Question Id : 260269133 Display Question Number : Yes Single Line Question Option : No Option Orientation : Vertical

M intersection is used while writing _____.

Options :

1. ✘ Multiply

2. ✘ Member

3. ✔ Manager

4. ✘ Mailer

Question Number : 33 Question Id : 260269133 Display Question Number : Yes Single Line Question Option : No Option Orientation : Vertical

M intersection is used while writing _____.

Options :

1. ✘ Multiply

2. ✘ Member

3. ✔ Manager

4. ✘ Mailer

Question Number : 34 Question Id : 260269134 Display Question Number : Yes Single Line Question Option : No Option Orientation : Vertical

“Thereafter” is a _____ consonant.

Options :

1. ✘ Double

2. ✔ Compound

3. ✘ Single

4. ✘ Simple

Question Number : 34 Question Id : 260269134 Display Question Number : Yes Single Line Question Option : No Option Orientation : Vertical

“Thereafter” is a _____ consonant.

Options :

1. ✘ Double

2. ✔ Compound

3. ✘ Single

4. ✘ Simple

Question Number : 35 Question Id : 260269135 Display Question Number : Yes Single Line Question Option : No Option Orientation : Vertical

B on the line is a short form for _____.

Options :

1. ✔ Be

2. ✘ But

3. ✘ To be

4. ✘ Bank

Question Number : 35 Question Id : 260269135 Display Question Number : Yes Single Line Question Option : No Option Orientation : Vertical

B on the line is a short form for _____.

Options :

1. ✓ Be
2. ✗ But
3. ✗ To be
4. ✗ Bank

Question Number : 36 Question Id : 260269136 Display Question Number : Yes Single Line Question Option : No Option Orientation : Vertical

The final s circle is written _____ the f or v hook.

Options :

1. ✗ On the upper side of
2. ✗ Before
3. ✓ Inside
4. ✗ Above

Question Number : 36 Question Id : 260269136 Display Question Number : Yes Single Line Question Option : No Option Orientation : Vertical

The final s circle is written _____ the f or v hook.

Options :

1. ✗ On the upper side of
2. ✗ Before
3. ✓ Inside
4. ✗ Above

Question Number : 37 Question Id : 260269137 Display Question Number : Yes Single Line Question Option : No Option Orientation : Vertical

In a simple t, the shun hook is written on the _____ side.

Options :

1. ✗ Left

2. ✘ Upper

3. ✘ Below

4. ✔ Right

Question Number : 37 Question Id : 260269137 Display Question Number : Yes Single Line Question Option : No Option Orientation : Vertical

In a simple t, the shun hook is written on the _____ side.

Options :

1. ✘ Left

2. ✘ Upper

3. ✘ Below

4. ✔ Right

Question Number : 38 Question Id : 260269138 Display Question Number : Yes Single Line Question Option : No Option Orientation : Vertical

The sounds heard in shorthand are divided into _____ vowels.

Options :

1. ✘ 4

2. ✔ 12

3. ✘ 8

4. ✘ 16

Question Number : 38 Question Id : 260269138 Display Question Number : Yes Single Line Question Option : No Option Orientation : Vertical

The sounds heard in shorthand are divided into _____ vowels.

Options :

1. ✘ 4

2. ✔ 12

3. ✘ 8

4. ✘ 16

Question Number : 39 Question Id : 260269139 Display Question Number : Yes Single Line Question Option : No Option Orientation : Vertical

The short form “the” in a phrase is represented by a _____.

Options :

1. ✘ Dash
2. ✘ Dot
3. ✔ Tick
4. ✘ Vowel

Question Number : 39 Question Id : 260269139 Display Question Number : Yes Single Line Question Option : No Option Orientation : Vertical

The short form “the” in a phrase is represented by a _____.

Options :

1. ✘ Dash
2. ✘ Dot
3. ✔ Tick
4. ✘ Vowel

Question Number : 40 Question Id : 260269140 Display Question Number : Yes Single Line Question Option : No Option Orientation : Vertical

“is as” is a _____ circle written on the line.

Options :

1. ✔ Large
2. ✘ Tiny
3. ✘ Thin
4. ✘ Thick

Question Number : 40 Question Id : 260269140 Display Question Number : Yes Single Line Question Option : No Option Orientation : Vertical

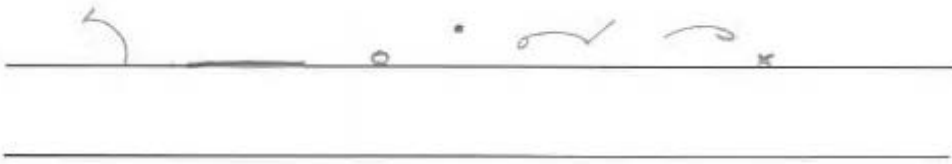
“is as” is a _____ circle written on the line.

Options :

- 1. ✓ Large
- 2. ✗ Tiny
- 3. ✗ Thin
- 4. ✗ Thick

Question Number : 41 Question Id : 260269141 Display Question Number : Yes Single Line Question Option : No Option Orientation : Vertical

Select the right word given below to fill in the blank.



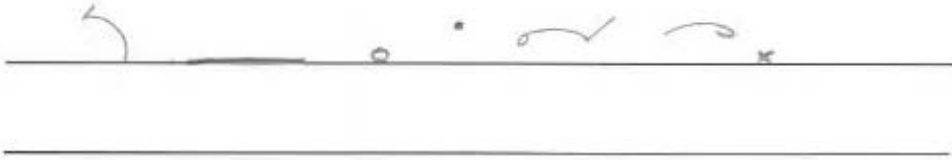
- A
- B
- C
- D





Options :

- 1. ✗ A
- 2. ✗ B
- 3. ✗ C
- 4. ✓ D

Question Number : 41 Question Id : 260269141 Display Question Number : Yes Single Line Question Option : No Option Orientation : Vertical

Select the right word given below to fill in the blank.



- A 
- B 
- C 
- D 





Options :

- 1. ✘ A
- 2. ✘ B
- 3. ✘ C
- 4. ✔ D

Question Number : 42 Question Id : 260269142 Display Question Number : Yes Single Line Question Option : No Option Orientation : Vertical

Select the right word given below to fill in the blank.



- A 
- B 
- C 
- D 

Options :

1. ✘ A

2. ✔ B

3. ✘ C

4. ✘ D

Question Number : 42 Question Id : 260269142 Display Question Number : Yes Single Line Question Option : No Option Orientation : Vertical

Select the right word given below to fill in the blank.



A 

B 

C 

D 

Options :

1. ✘ A

2. ✔ B

3. ✘ C

4. ✘ D

Question Number : 43 Question Id : 260269143 Display Question Number : Yes Single Line Question Option : No Option Orientation : Vertical

Select the right word given below to fill in the blank.

A

B

C

D

Options :

1. ✓ A

2. ✗ B

3. ✗ C

4. ✗ D

Question Number : 43 Question Id : 260269143 Display Question Number : Yes Single Line Question Option : No Option Orientation : Vertical

Select the right word given below to fill in the blank.

A

B

C

D

Options :

1. ✓ A

2. ✗ B

3. ✗ C

4. ✗ D

Question Number : 44 Question Id : 260269144 Display Question Number : Yes Single Line Question Option : No Option Orientation : Vertical

Select the right word given below to fill in the blank.



A



B



C



D



Options :

1. ✗ A

2. ✗ B

3. ✓ C

4. ✗ D

Question Number : 44 Question Id : 260269144 Display Question Number : Yes Single Line Question Option : No Option Orientation : Vertical

Select the right word given below to fill in the blank.



A 

B 

C 

D 

Options :

1. ✘ A


2. ✘ B

3. ✔ C

4. ✘ D

Question Number : 45 Question Id : 260269145 Display Question Number : Yes Single Line Question Option : No Option Orientation : Vertical

Select the right word given below to fill in the blank.



A 

B 

C 

D 

Options :

1. ✔ A


2. ✘ B

3. ✘ C

4. ✘ D

Question Number : 45 Question Id : 260269145 Display Question Number : Yes Single Line Question Option : No Option Orientation : Vertical

Select the right word given below to fill in the blank.



A

B

C

D

Options :

1. ✔ A

2. ✘ B

3. ✘ C

4. ✘ D

Question Number : 46 Question Id : 260269146 Display Question Number : Yes Single Line Question Option : No Option Orientation : Vertical

Fill in the blanks in the sentence below with suitable articles. Choose your answer from the options given.

_____ team at Massachusetts Institute of Technology has designed _____ new type of micro-particle that could combine everything into _____ single jab.

Options :

1. ✘ The, a, the

2. A, a, a3. A, the, a4. The, the, the

Question Number : 46 Question Id : 260269146 Display Question Number : Yes Single Line Question Option : No Option Orientation : Vertical

Fill in the blanks in the sentence below with suitable articles. Choose your answer from the options given.

_____ team at Massachusetts Institute of Technology has designed _____ new type of micro-particle that could combine everything into _____ single jab.

Options :

1. The, a, the2. A, a, a3. A, the, a4. The, the, the

Question Number : 47 Question Id : 260269147 Display Question Number : Yes Single Line Question Option : No Option Orientation : Vertical

Fill in the blanks in the sentence below with suitable articles. Choose your answer from the options given.

It's _____ truly worldwide plan; _____ countries that have the highest number of wild plant cousins are Brazil, China, and India, while _____ countries with _____ highest concentration of them are Azerbaijan, Portugal and Greece.

Options :

1. a, the, the, the2. a, the, a, the3. the, a, the, a4. a, a, the, the

Question Number : 47 Question Id : 260269147 Display Question Number : Yes Single Line Question Option : No Option Orientation : Vertical

Fill in the blanks in the sentence below with suitable articles. Choose your answer from the options given.

It's _____ truly worldwide plan; _____ countries that have the highest number of wild plant cousins are Brazil, China, and India, while _____ countries with _____ highest concentration of them are Azerbaijan, Portugal and Greece.

Options :

1. ✓ a, the, the, the
2. ✗ a, the, a, the
3. ✗ the, a, the, a
4. ✗ a, a, the, the

Question Number : 48 Question Id : 260269148 Display Question Number : Yes Single Line Question Option : No Option Orientation : Vertical

Fill in the blanks in the sentence below with suitable prepositions. Choose your answer from the options given.

Heart attacks occur when the supply _____ blood _____ the heart gets blocked, usually _____ a blood clot.

Options :

1. ✗ of, into, through
2. ✗ of, through, with
3. ✗ in, to, by
4. ✓ of, to, by

Question Number : 48 Question Id : 260269148 Display Question Number : Yes Single Line Question Option : No Option Orientation : Vertical

Fill in the blanks in the sentence below with suitable prepositions. Choose your answer from the options given.

Heart attacks occur when the supply _____ blood _____ the heart gets blocked, usually _____ a blood clot.

Options :

1. ✗ of, into, through
2. ✗ of, through, with
3. ✗ in, to, by
4. ✓ of, to, by

Question Number : 49 Question Id : 260269149 Display Question Number : Yes Single Line Question Option : No Option Orientation : Vertical

Fill in the blank in the sentence below with a suitable collective noun. Choose your answer from the options given.

The Andaman and the Nicobar along with Lakshwadeep are _____ of islands.

Options :

1. ✘ a chain
2. ✘ a range
3. ✔ an archipelago
4. ✘ a cluster

Question Number : 49 Question Id : 260269149 Display Question Number : Yes Single Line Question Option : No Option Orientation : Vertical

Fill in the blank in the sentence below with a suitable collective noun. Choose your answer from the options given.

The Andaman and the Nicobar along with Lakshwadeep are _____ of islands.

Options :

1. ✘ a chain
2. ✘ a range
3. ✔ an archipelago
4. ✘ a cluster

Question Number : 50 Question Id : 260269150 Display Question Number : Yes Single Line Question Option : No Option Orientation : Vertical

A sentence is given in four parts as options. One of the parts contains an error. Choose the option that has the error.

Options :

1. ✔ Doctor's removed her gall bladder -
2. ✘ but after symptoms didn't improve, she was
3. ✘ eventually diagnosed with fibromyalgia,
4. ✘ a widespread condition that affects the musculoskeletal system.

Question Number : 50 Question Id : 260269150 Display Question Number : Yes Single Line Question Option : No Option Orientation : Vertical

A sentence is given in four parts as options. One of the parts contains an error. Choose the option that has the error.

Options :

1. ✔ Doctor's removed her gall bladder -
2. ✘ but after symptoms didn't improve, she was

3. ✘ eventually diagnosed with fibromyalgia,
4. ✘ a widespread condition that affects the musculoskeletal system.

Question Number : 51 Question Id : 260269151 Display Question Number : Yes Single Line Question Option : No Option Orientation : Vertical

Choose the option that offers the correct **synonym** of the highlighted word in the sentence given below. Pay attention to the meaning of the highlighted word in context of the sentence:

The letters are **authentic** and unfiltered. The writers knew there was no censorship here and they spoke from their hearts.

Options :

1. ✔ bona fide
2. ✘ poetic
3. ✘ specious
4. ✘ feigned

Question Number : 51 Question Id : 260269151 Display Question Number : Yes Single Line Question Option : No Option Orientation : Vertical

Choose the option that offers the correct **synonym** of the highlighted word in the sentence given below. Pay attention to the meaning of the highlighted word in context of the sentence:

The letters are **authentic** and unfiltered. The writers knew there was no censorship here and they spoke from their hearts.

Options :

1. ✔ bona fide
2. ✘ poetic
3. ✘ specious
4. ✘ feigned

Question Number : 52 Question Id : 260269152 Display Question Number : Yes Single Line Question Option : No Option Orientation : Vertical

Choose the option that offers the correct **antonym** of the highlighted word in the sentence given below. Pay attention to the meaning of the highlighted word in context of the sentence:

Leaving school in London before he was 16, Daniel says: "I guess I was a bit of a **rebel**. I wanted to do what I wanted to do."

Options :

1. ✘ anarchist
2. ✘ opposed
3. ✘ generous
4. ✔ obedient

Question Number : 52 Question Id : 260269152 Display Question Number : Yes Single Line Question Option : No Option Orientation : Vertical

Choose the option that offers the correct **antonym** of the highlighted word in the sentence given below. Pay attention to the meaning of the highlighted word in context of the sentence:

Leaving school in London before he was 16, Daniel says: "I guess I was a bit of a **rebel**. I wanted to do what I wanted to do."

Options :

1. ✘ anarchist
2. ✘ opposed
3. ✘ generous
4. ✔ obedient

Question Number : 53 Question Id : 260269153 Display Question Number : Yes Single Line Question Option : No Option Orientation : Vertical

From the options given below, choose the sentence that has the conjunctions used correctly.

Options :

1. ✔ My friend is a novelist, essayist, playwright, and poet; moreover, she is a distinguished scholar.
2. ✘ My friend is a novelist, essayist, playwright, and poet; however, she is a distinguished scholar.
3. ✘ My friend is a novelist, essayist, playwright, and poet; because she is a distinguished scholar.
4. ✘ My friend is a novelist, essayist, playwright, and poet; so she is a distinguished scholar.

Question Number : 53 Question Id : 260269153 Display Question Number : Yes Single Line Question Option : No Option Orientation : Vertical

From the options given below, choose the sentence that has the conjunctions used correctly.

Options :

1. ✓

My friend is a novelist, essayist, playwright, and poet; moreover, she is a distinguished scholar.

2. ✗

My friend is a novelist, essayist, playwright, and poet; however, she is a distinguished scholar.

3. ✗

My friend is a novelist, essayist, playwright, and poet; because she is a distinguished scholar.

4. ✗

My friend is a novelist, essayist, playwright, and poet; so she is a distinguished scholar.

Question Number : 54 Question Id : 260269154 Display Question Number : Yes Single Line Question Option : No Option Orientation : Vertical

From the options given below, choose the phrase that can be used to replace the highlighted word with a phrasal verb:

We worked so hard this year that we had to **go on a vacation** for a week.

Options :

1. ✗

get around

2. ✗

get away with

3. ✓

get away

4. ✗

get back into

Question Number : 54 Question Id : 260269154 Display Question Number : Yes Single Line Question Option : No Option Orientation : Vertical

From the options given below, choose the phrase that can be used to replace the highlighted word with a phrasal verb:

We worked so hard this year that we had to **go on a vacation** for a week.

Options :

1. ✗

get around

2. ✗

get away with

3. ✓

get away

4. ✗

get back into

Question Number : 55 Question Id : 260269155 Display Question Number : Yes Single Line Question Option : No Option Orientation : Vertical

From the options given below choose the one that has been spelt correctly to form a proper sentence:

We decided to lazily _____ the entire length of the beach in Goa and enjoy the fresh air.

Options :

1. ✘ pirambulate
2. ✘ parambulate
3. ✘ purambulate
4. ✔ perambulate

Question Number : 55 Question Id : 260269155 Display Question Number : Yes Single Line Question Option : No Option Orientation : Vertical

From the options given below choose the one that has been spelt correctly to form a proper sentence:

We decided to lazily _____ the entire length of the beach in Goa and enjoy the fresh air.

Options :

1. ✘ pirambulate
2. ✘ parambulate
3. ✘ purambulate
4. ✔ perambulate

Question Number : 56 Question Id : 260269156 Display Question Number : Yes Single Line Question Option : No Option Orientation : Vertical

निम्नलिखित शब्दों में से तत्सम शब्द को पहचानिए।

Options :

1. ✘ सांस
2. ✘ धतूरा
3. ✔ निर्वाह
4. ✘ बन्दर

Question Number : 56 Question Id : 260269156 Display Question Number : Yes Single Line Question Option : No Option Orientation : Vertical

निम्नलिखित शब्दों में से तत्सम शब्द को पहचानिए।

Options :

1. ✘ सांस
2. ✘ धतूरा
3. ✔ निर्वाह
4. ✘ बन्दर

Question Number : 57 Question Id : 260269157 Display Question Number : Yes Single Line Question Option : No Option Orientation : Vertical

निम्नलिखित शब्दों में से तद्भव शब्द को पहचानिए।

Options :

1. ✘ कारवेल
2. ✔ पोता
3. ✘ दुग्ध
4. ✘ घोटक

Question Number : 57 Question Id : 260269157 Display Question Number : Yes Single Line Question Option : No Option Orientation : Vertical

निम्नलिखित शब्दों में से तद्भव शब्द को पहचानिए।

Options :

1. ✘ कारवेल
2. ✔ पोता
3. ✘ दुग्ध
4. ✘ घोटक

Question Number : 58 Question Id : 260269158 Display Question Number : Yes Single Line Question Option : No Option Orientation : Vertical

जिस वस्तु की सहायता से या जिसके द्वारा कोई कार्य किया जाता है वहाँ कारक होगा:

Options :

1. ✘ कर्ता कारक
2. ✔ करण कारक
3. ✘ संबोधन कारक
4. ✘ सम्प्रदान कारक

Question Number : 58 Question Id : 260269158 Display Question Number : Yes Single Line Question Option : No Option Orientation : Vertical

जिस वस्तु की सहायता से या जिसके द्वारा कोई कार्य किया जाता है वहाँ कारक होगा:

Options :

1. ✘ कर्ता कारक
2. ✔ करण कारक
3. ✘ संबोधन कारक
4. ✘ सम्प्रदान कारक

Question Number : 59 Question Id : 260269159 Display Question Number : Yes Single Line Question Option : No Option Orientation : Vertical

निम्नलिखित वाक्यों में से कौन-सा वाक्य शुद्ध है?

Options :

1. ✘ मुझ को घुमने जाने का अच्छी लगते है।
2. ✔ मुझे घूमना अच्छा लगता है।
3. ✘ मुझ को घूमना अच्छा लगता है।
4. ✘ मूझे घूमना अच्छा लगता है।

Question Number : 59 Question Id : 260269159 Display Question Number : Yes Single Line Question Option : No Option Orientation : Vertical

निम्नलिखित वाक्यों में से कौन-सा वाक्य शुद्ध है?

Options :

1. ✘ मुझ को घुमने जाने का अच्छी लगते है।
2. ✔ मुझे घूमना अच्छा लगता है।
3. ✘ मुझ को घूमना अच्छा लगता है।
4. ✘ मूझे घूमना अच्छा लगता है।

Question Number : 60 Question Id : 260269160 Display Question Number : Yes Single Line Question Option : No Option Orientation : Vertical

“चारू चंद्र की चंचल किरणें खेल रही है जल-थल में” प्रस्तुत पंक्ति में कौन-सा अलंकार समाहित है?

Options :

1. ✘ यमक
2. ✔ अनुप्रास
3. ✘ उत्पेक्षा
4. ✘ उपमा

Question Number : 60 Question Id : 260269160 Display Question Number : Yes Single Line Question Option : No Option Orientation : Vertical

“चारू चंद्र की चंचल किरणें खेल रही है जल-थल में” प्रस्तुत पंक्ति में कौन-सा अलंकार समाहित है?

Options :

1. ✘ यमक
2. ✔ अनुप्रास
3. ✘ उत्पेक्षा
4. ✘ उपमा

Question Number : 61 Question Id : 260269161 Display Question Number : Yes Single Line Question Option : No Option Orientation : Vertical

भारतने चीन को मुँहतोड जवाब दिया।

रेखांकित शब्द में कौन-सा समास समाहित है?

Options :

1. ✘ व्दिगु समास
2. ✔ तत्पुरुष समास
3. ✘ अव्ययी भाव समास
4. ✘ कर्मधारय समास

Question Number : 61 Question Id : 260269161 Display Question Number : Yes Single Line Question Option : No Option Orientation : Vertical

भारतने चीन को मुँहतोड जवाब दिया।

रेखांकित शब्द में कौन-सा समास समाहित है?

Options :

1. ✘ व्दिगु समास
2. ✔ तत्पुरुष समास
3. ✘ अव्ययी भाव समास
4. ✘ कर्मधारय समास

Question Number : 62 Question Id : 260269162 Display Question Number : Yes Single Line Question Option : No Option Orientation : Vertical

माँ का क्रोध देखकर बच्चा काँपने लगा।

रेखांकित शब्द कौन-से रस का स्थायी भाव है?

Options :

1. ✘ वीर रस
2. ✔ रौद्र रस
3. ✘ शृंगार रस
4. ✘ भयानक रस

Question Number : 62 Question Id : 260269162 Display Question Number : Yes Single Line Question Option : No Option Orientation : Vertical

माँ का क्रोध देखकर बच्चा काँपने लगा।

रेखांकित शब्द कौन-से रस का स्थायी भाव है?

Options :

1. ✘ वीर रस
2. ✔ रौद्र रस
3. ✘ शृंगार रस
4. ✘ भयानक रस

Question Number : 63 Question Id : 260269163 Display Question Number : Yes Single Line Question Option : No Option Orientation : Vertical

कौन-सा शब्द 'कमल' का पर्यायवाची नहीं है?

Options :

1. ✘ नीरज
2. ✘ पंकज
3. ✔ अक्षि
4. ✘ राजीव

Question Number : 63 Question Id : 260269163 Display Question Number : Yes Single Line Question Option : No Option Orientation : Vertical

कौन-सा शब्द 'कमल' का पर्यायवाची नहीं है?

Options :

1. ✘ नीरज
2. ✘ पंकज
3. ✔ अक्षि
4. ✘ राजीव

Question Number : 64 Question Id : 260269164 Display Question Number : Yes Single Line Question Option : No Option Orientation : Vertical

उसे तो राई का पहाड़ बनाकर बातें करने की आदत है।
रेखांकित मुहावरे का सही अर्थ होगा:

Options :

1. ✘ मजाक करना।
2. ✔ बड़ा-चढ़ाकर बात करना।
3. ✘ झूठी कहानी कहना।
4. ✘ अत्यधिक बातें करना।

Question Number : 64 Question Id : 260269164 Display Question Number : Yes Single Line Question Option : No Option Orientation : Vertical

उसे तो राई का पहाड़ बनाकर बातें करने की आदत है।
रेखांकित मुहावरे का सही अर्थ होगा:

Options :

1. ✘ मजाक करना।
2. ✔ बड़ा-चढ़ाकर बात करना।
3. ✘ झूठी कहानी कहना।
4. ✘ अत्यधिक बातें करना।

Question Number : 65 Question Id : 260269165 Display Question Number : Yes Single Line Question Option : No Option Orientation : Vertical

भाववाचक संज्ञा पहचानिए।

Options :

1. ✘ समझदार
2. ✔ प्राचीनता
3. ✘ बुरा
4. ✘ पौराणिक

Question Number : 65 Question Id : 260269165 Display Question Number : Yes Single Line Question Option : No Option Orientation : Vertical

भाववाचक संज्ञा पहचानिए।

Options :

1. ✘ समझदार
2. ✔ प्राचीनता
3. ✘ बुरा
4. ✘ पौराणिक

Question Number : 66 Question Id : 260269166 Display Question Number : Yes Single Line Question Option : No Option Orientation : Vertical

If $x = \frac{\sqrt{2}+1}{\sqrt{2}-1}$, $y = \frac{\sqrt{2}-1}{\sqrt{2}+1}$, then $x^2 + y^2 = ?$

Options :

1. ✘ 21
2. ✘ 30
3. ✘ 24
4. ✔ 34

Question Number : 66 Question Id : 260269166 Display Question Number : Yes Single Line Question Option : No Option Orientation : Vertical

यदि $x = \frac{\sqrt{2+1}}{\sqrt{2-1}}$, $y = \frac{\sqrt{2-1}}{\sqrt{2+1}}$ है, तो $x^2 + y^2 = ?$

Options :

1. ✘ 21
2. ✘ 30
3. ✘ 24
4. ✔ 34

Question Number : 67 Question Id : 260269167 Display Question Number : Yes Single Line Question Option : No Option Orientation : Vertical

The average of the sum of the first twenty-five prime numbers is:

Options :

1. ✘ 42.5
2. ✘ 42.3
3. ✘ 42
4. ✔ 42.4

Question Number : 67 Question Id : 260269167 Display Question Number : Yes Single Line Question Option : No Option Orientation : Vertical

प्रथम पच्चीस अभाज्य संख्याओं के योग का औसत ज्ञात कीजिए।

Options :

1. ✘ 42.5
2. ✘ 42.3
3. ✘ 42
4. ✔ 42.4

Question Number : 68 Question Id : 260269168 Display Question Number : Yes Single Line Question Option : No Option Orientation : Vertical

X and Y borrowed ₹ 7,500 and ₹ 6,250 respectively at same rate of interest for 2 years. If X paid an interest of ₹ 187.5 more than Y, then the rate of interest per annum is:

Options :

1. ✘ 6.5%
2. ✔ 7.5%
3. ✘ 7%
4. ✘ 7.3%

Question Number : 68 Question Id : 260269168 Display Question Number : Yes Single Line Question Option : No Option Orientation : Vertical

X और Y ब्याज की एकसमान दर पर 2 वर्ष के लिए क्रमशः ₹ 7,500 और ₹ 6,250 उधार लेते हैं। यदि X, Y से ₹ 187.5 अधिक ब्याज अदा करता है, तो ब्याज की वार्षिक दर है:

Options :

1. ✘ 6.5%

2. ✓ 7.5%

3. ✗ 7%

4. ✗ 7.3%

Question Number : 69 Question Id : 260269169 Display Question Number : Yes Single Line Question Option : No Option Orientation : Vertical

The population of a city increases by 10% each year. After how many years will the original population be doubled?

Options :

1. ✗ 8 years

2. ✓ 7.5 years

3. ✗ 7 years

4. ✗ 9 years

Question Number : 69 Question Id : 260269169 Display Question Number : Yes Single Line Question Option : No Option Orientation : Vertical

एक शहर की जनसंख्या में प्रत्येक वर्ष 10% की वृद्धि होती है। कितने वर्षों के बाद जनसंख्या वर्तमान जनसंख्या की दोगुनी हो जायेगी?

Options :

1. ✗ 8 वर्ष

2. ✓ 7.5 वर्ष

3. ✗ 7 वर्ष

4. ✗ 9 वर्ष

Question Number : 70 Question Id : 260269170 Display Question Number : Yes Single Line Question Option : No Option Orientation : Vertical

If α and β are the real roots of the equation $x^2 - (p - 2)x + (p^2 + 3p + 5) = 0$, where p is a real number, then the greatest possible value of $\alpha^2 + \beta^2$ is achieved at $p = \underline{\hspace{2cm}}$.

Options :

1. ✗ -4

2. ✓ -5

3. ✘ 0

4. ✘ 3

Question Number : 70 Question Id : 260269170 Display Question Number : Yes Single Line Question Option : No Option Orientation : Vertical

यदि समीकरण $x^2 - (p - 2)x + (p^2 + 3p + 5) = 0$ के वास्तविक मूल α और β हैं और p एक वास्तविक संख्या है, तो $\alpha^2 + \beta^2$ का अधिकतम मूल्य $p = \underline{\hspace{2cm}}$ पर प्राप्त किया जा सकता है।

Options :

1. ✘ -4

2. ✔ -5

3. ✘ 0

4. ✘ 3

Question Number : 71 Question Id : 260269171 Display Question Number : Yes Single Line Question Option : No Option Orientation : Vertical

x varies directly as cube root of y , when $x = 5$ and $y = 3375$. What is the value of y when $x = 1$?

Options :

1. ✘ 1/9

2. ✘ 1/27

3. ✘ 9

4. ✔ 27

Question Number : 71 Question Id : 260269171 Display Question Number : Yes Single Line Question Option : No Option Orientation : Vertical

x का मान y के घनमूल के समानुपाती है, जहां $x = 5$ और $y = 3375$ है। जब $x = 1$ हो, तब y का मूल्य क्या होगा?

Options :

1. ✘ 1/9

2. ✘ 1/27

3. ✘ 9

4. ✔ 27

Question Number : 72 Question Id : 260269172 Display Question Number : Yes Single Line Question Option : No Option Orientation : Vertical

The speed of a boat in still water is 24 km/h. If the speed of the stream is 6 km/h, in how many minutes will the boat go 18 km downstream?

Options :

1. ✘ 52 min
2. ✘ 48 min
3. ✔ 36 min
4. ✘ 60 min

Question Number : 72 Question Id : 260269172 Display Question Number : Yes Single Line Question Option : No Option Orientation : Vertical

एक नाव की शांत जल में चाल 24 किमी/घंटा है। यदि धारा की चाल 6 किमी/घंटा है, तो कितने मिनिटों में नाव बहाव की दिशा में 18 किमी की दुरी तय कर पायेगी?

Options :

1. ✘ 52 मिनट
2. ✘ 48 मिनट
3. ✔ 36 मिनट
4. ✘ 60 मिनट

Question Number : 73 Question Id : 260269173 Display Question Number : Yes Single Line Question Option : No Option Orientation : Vertical

A can do a task in 24 days and B can do it in 20 days. They work at it together for 6 days and then A goes away. In how many days will B finish the remaining tasks?

Options :

1. ✘ 15 days
2. ✘ 14 days
3. ✘ 10 days
4. ✔ 9 days

Question Number : 73 Question Id : 260269173 Display Question Number : Yes Single Line Question Option : No Option Orientation : Vertical

A एक काम को 24 दिनों में और B उसी काम को 20 दिनों में कर सकता है। वे दोनों मिलकर 6 दिन यह कार्य करते हैं, और फिर A चला जाता है। शेष कार्य को B कितने दिनों में समाप्त करेगा?

Options :

1. ✘ 15 दिन
2. ✘ 14 दिन
3. ✘ 10 दिन
4. ✔ 9 दिन

Question Number : 74 Question Id : 260269174 Display Question Number : Yes Single Line Question Option : No Option Orientation : Vertical

A container has 40 litres of milk whose cost is ₹ 3.5 per litre. How many litres of water should be added to the container such that the cost of the milk reduces to ₹ 2 per litre?

Options :

1. ✘ 25
2. ✔ 30
3. ✘ 28
4. ✘ 32

Question Number : 74 Question Id : 260269174 Display Question Number : Yes Single Line Question Option : No Option Orientation : Vertical

एक डिब्बे में 40 लीटर दूध है जिसका मूल्य ₹ 3.5 प्रति लीटर है। डिब्बे में कितने लीटर पानी डाला जाए कि दूध का मूल्य घटकर ₹ 2 प्रति लीटर हो जाये?

Options :

1. ✘ 25
2. ✔ 30
3. ✘ 28
4. ✘ 32

Question Number : 75 Question Id : 260269175 Display Question Number : Yes Single Line Question Option : No Option Orientation : Vertical

A person bought two articles, A and B, for ₹ 3,420. He sold A at a loss of 10 % and B at a profit of 25%. If the cost price of A was the same as the selling price of B, then what was his overall loss/profit?

Options :

1. $5\frac{5}{9}\%$ profit
2. $5\frac{5}{9}\%$ loss
3. $5\frac{5}{19}\%$ profit
4. $5\frac{5}{19}\%$ loss

Question Number : 75 Question Id : 260269175 Display Question Number : Yes Single Line Question Option : No Option Orientation : Vertical

एक व्यक्ति दो वस्तुएं, A और B, ₹ 3,420 में खरीदता है। वह A को 10% हानि और B को 25% लाभ पर बेच देता है। यदि A का क्रय मूल्य B के विक्रय मूल्य के बराबर है, तो कुल हानि / लाभ ज्ञात कीजिए।

Options :

1. $5\frac{5}{9}\%$ लाभ
2. $5\frac{5}{9}\%$ हानि
3. $5\frac{5}{19}\%$ लाभ
4. $5\frac{5}{19}\%$ हानि

Question Number : 76 Question Id : 260269176 Display Question Number : Yes Single Line Question Option : No Option Orientation : Vertical

A block of wood floats in water such that $1/n$ of its volume is under water. The density of the block is 0.4 times the density of water. The value of n is:

Options :

1. 0.5
2. 1.0
3. 2.0
4. 2.5

Question Number : 76 Question Id : 260269176 Display Question Number : Yes Single Line Question Option : No Option Orientation : Vertical

लकड़ी का एक ब्लॉक पानी में इस प्रकार तैरता है कि इसका $1/n$ भाग पानी के नीचे है। ब्लॉक का घनत्व पानी के घनत्व का 0.4 गुना है। n का मूल्य है:

Options :

1. ✘ 0.5
2. ✘ 1.0
3. ✘ 2.0
4. ✔ 2.5

Question Number : 77 Question Id : 260269177 Display Question Number : Yes Single Line Question Option : No Option Orientation : Vertical

An object is dropped from a height of 313.6 m. The time taken by it to reach the ground is:

Options :

1. ✘ 4 seconds
2. ✔ 8 seconds
3. ✘ 12 seconds
4. ✘ 14 seconds

Question Number : 77 Question Id : 260269177 Display Question Number : Yes Single Line Question Option : No Option Orientation : Vertical

एक वस्तु को 313.6 मीटर की ऊंचाई से गिराया जाता है। इसे जमीन तक पहुंचने में लगने वाला समय है:

Options :

1. ✘ 4 सेकंड
2. ✔ 8 सेकंड
3. ✘ 12 सेकंड
4. ✘ 14 सेकंड

Question Number : 78 Question Id : 260269178 Display Question Number : Yes Single Line Question Option : No Option Orientation : Vertical

An object is placed on the principal axis of a convex lens at a distance less than its focal length. The image formed by the lens is:

Options :

1. ✘ Real and diminished
2. ✘ Real and enlarged
3. ✘ Virtual and diminished
4. ✔ Virtual and enlarged

Question Number : 78 Question Id : 260269178 Display Question Number : Yes Single Line Question Option : No Option Orientation : Vertical

एक वस्तु को उत्तल लेंस की फोकल लम्बाई से कम दूरी पर मुख्य अक्ष रेखा पर रखा जाता है। लेंस द्वारा बनी छवि होती है:

Options :

1. ✘ वास्तविक और संकुचित
2. ✘ वास्तविक और आकार में बड़ी
3. ✘ आभासी और संकुचित
4. ✔ आभासी और आकार में बड़ी

Question Number : 79 Question Id : 260269179 Display Question Number : Yes Single Line Question Option : No Option Orientation : Vertical

A ray of light passes from air to medium 1 (refractive index 1.7) and then into medium 2 (refractive index 1.4). As the ray travels, it bends _____.

Options :

1. ✘ away from the normal in both the mediums
2. ✘ towards the normal in both the mediums
3. ✘ away from the normal in medium 1 and towards the normal in medium 2
4. ✔ towards the normal in medium 1 and away from the normal in medium 2

Question Number : 79 Question Id : 260269179 Display Question Number : Yes Single Line Question Option : No Option Orientation : Vertical

प्रकाश की किरण हवा से होती हुई माध्यम 1 (अपवर्तक सूचकांक 1.7) से और फिर माध्यम 2 (अपवर्तक सूचकांक 1.4) से गुजरती है। किरण आगे बढ़ते हुए, _____ मुड़ जाती है।

Options :

1. ✘ दोनों माध्यमों में सामान्य से दूर
2. ✘ दोनों माध्यमों में सामान्य की तरफ
3. ✘ माध्यम 1 में सामान्य से दूर और माध्यम 2 में सामान्य की तरफ
4. ✔ माध्यम 1 में सामान्य की तरफ और माध्यम 2 में सामान्य से दूर

Question Number : 80 Question Id : 260269180 Display Question Number : Yes Single Line Question Option : No Option Orientation : Vertical

An object is placed at a distance of 50 cm in front of a convex mirror of radius of curvature 80 cm. Following Cartesian sign convention, the image distance, v and the magnification, m are respectively:

Options :

1. ✘ $(100/9)$ cm, $-(2/9)$
2. ✘ $(200/9)$ cm, $-(4/9)$
3. ✘ $(100/9)$ cm, $(2/9)$
4. ✔ $(200/9)$ cm, $(4/9)$

Question Number : 80 Question Id : 260269180 Display Question Number : Yes Single Line Question Option : No Option Orientation : Vertical

एक वस्तु को 80 सेंटीमीटर वक्रता त्रिज्या वाले उत्तल दर्पण के सामने 50 सेंटीमीटर की दूरी पर रखा जाता है। कार्टेसियन संकेत रीति से छवि की दूरी, v और आवर्धन के अनुसार, m क्रमशः हैं:

Options :

1. ✘ $(100/9)$ सेंटीमीटर, $-(2/9)$
2. ✘ $(200/9)$ सेंटीमीटर, $-(4/9)$
3. ✘ $(100/9)$ सेंटीमीटर, $(2/9)$
4. ✔ $(200/9)$ सेंटीमीटर, $(4/9)$

Question Number : 81 Question Id : 260269181 Display Question Number : Yes Single Line Question Option : No Option Orientation : Vertical

Which one of the following ionic compounds has the highest melting point?

Options :

1. ✘ LiCl

2. ✘ NaCl

3. ✔ CaO

4. ✘ CsCl

Question Number : 81 Question Id : 260269181 Display Question Number : Yes Single Line Question Option : No Option Orientation : Vertical

निम्नलिखित में से किस आयनिक यौगिक का गलनांक उच्चतम होता है?

Options :

1. ✘ LiCl

2. ✘ NaCl

3. ✔ CaO

4. ✘ CsCl

Question Number : 82 Question Id : 260269182 Display Question Number : Yes Single Line Question Option : No Option Orientation : Vertical

Which one of the following represents the formula of an ether?

Options :

1. ✘ RCOR

2. ✘ RCOOR

3. ✔ ROR

4. ✘ RCHO

Question Number : 82 Question Id : 260269182 Display Question Number : Yes Single Line Question Option : No Option Orientation : Vertical

निम्नलिखित में से कौन सा विकल्प ईथर का सूत्र दर्शाता है?

Options :

1. ✘ RCOR

2. ✘ RCOOR

3. ✔ ROR

4. ✘ RCHO

Question Number : 83 Question Id : 260269183 Display Question Number : Yes Single Line Question Option : No Option Orientation : Vertical

Which one of the following represents the mass of one mole of sulphur dioxide molecules?

Options :

1. ✘ 6.4 grams

2. ✔ 64 grams

3. ✘ 32 grams

4. ✘ 3.2 grams

Question Number : 83 Question Id : 260269183 Display Question Number : Yes Single Line Question Option : No Option Orientation : Vertical

निम्नलिखित में से कौन सा विकल्प सल्फर डाइऑक्साइड अणुओं के एक मोल का द्रव्यमान दर्शाता है?

Options :

1. ✘ 6.4 ग्राम

2. ✔ 64 ग्राम

3. ✘ 32 ग्राम

4. ✘ 3.2 ग्राम

Question Number : 84 Question Id : 260269184 Display Question Number : Yes Single Line Question Option : No Option Orientation : Vertical

What is the functional group present in the compound CH_3CHO ?

Options :

1. ✘ Ether

2. ✘ Ketone

3. ✘ Ester

4. ✓ Aldehyde

Question Number : 84 Question Id : 260269184 Display Question Number : Yes Single Line Question Option : No Option Orientation : Vertical

CH₃CHO यौगिक में कौन सा क्रियात्मक समूह उपस्थित है?

Options :

1. ✗ ईथर
2. ✗ कीटोन
3. ✗ एस्टर
4. ✓ एल्डिहाइड

Question Number : 85 Question Id : 260269185 Display Question Number : Yes Single Line Question Option : No Option Orientation : Vertical

The general formula C_nH_{2n-2} represents which one of the following class of compounds?

Options :

1. ✗ Alkanes
2. ✗ Alkenes
3. ✓ Alkynes
4. ✗ Alkanols

Question Number : 85 Question Id : 260269185 Display Question Number : Yes Single Line Question Option : No Option Orientation : Vertical

सामान्य सूत्र C_nH_{2n-2} निम्नलिखित में से किस वर्ग के यौगिकों को दर्शाता है?

Options :

1. ✗ एल्केन्स
2. ✗ एल्कीन्स
3. ✓ एल्काइन्स
4. ✗ एल्केनॉल्स

Question Number : 86 Question Id : 260269186 Display Question Number : Yes Single Line Question Option : No Option Orientation : Vertical

According to the Natya Shastra, compiled by Bharat Muni, which of the following is a category of wind instruments?

Options :

1. ✘ Tata Vadya
2. ✘ Avannaddha Vadya
3. ✔ Sushira Vadya
4. ✘ Ghana Vadya

Question Number : 86 Question Id : 260269186 Display Question Number : Yes Single Line Question Option : No Option Orientation : Vertical

भरत मुनि द्वारा संकलित नाट्य शास्त्र के अनुसार निम्नलिखित वाद्यों में से कौनसी एक वायु वाद्ययंत्रों की श्रेणी है?

Options :

1. ✘ तत वाद्य
2. ✘ अवनद्ध वाद्य
3. ✔ सुषिर वाद्य
4. ✘ घन वाद्य

Question Number : 87 Question Id : 260269187 Display Question Number : Yes Single Line Question Option : No Option Orientation : Vertical

In which of the following years was the 'Quit India Movement' launched?

Options :

1. ✘ 1940
2. ✘ 1936
3. ✘ 1938
4. ✔ 1942

Question Number : 87 Question Id : 260269187 Display Question Number : Yes Single Line Question Option : No Option Orientation : Vertical

'भारत छोड़ो आंदोलन' निम्नलिखित में से किस वर्ष शुरू किया गया था?

Options :

1. ✘ 1940
2. ✘ 1936
3. ✘ 1938
4. ✔ 1942

Question Number : 88 Question Id : 260269188 Display Question Number : Yes Single Line Question Option : No Option Orientation : Vertical

Keoladeo National Park, one of the world's important bird breeding and feeding grounds, is in _____.

Options :

1. ✔ Rajasthan
2. ✘ Gujarat
3. ✘ Jharkhand
4. ✘ Madhya Pradesh

Question Number : 88 Question Id : 260269188 Display Question Number : Yes Single Line Question Option : No Option Orientation : Vertical

दुनिया के महत्वपूर्ण पक्षी प्रजनन और भोजन स्थलों में से एक केवलादेव राष्ट्रीय उद्यान _____ में है।

Options :

1. ✔ राजस्थान
2. ✘ गुजरात
3. ✘ झारखंड
4. ✘ मध्य प्रदेश

Question Number : 89 Question Id : 260269189 Display Question Number : Yes Single Line Question Option : No Option Orientation : Vertical

As per discussions in the GST Council Meeting held on 18th May 2017, GST rate for Pizza Bread is:

Options :

1. ✔ 5%
2. ✘ 0% (Nil)

3. ✘ 28%

4. ✘ 18%

Question Number : 89 Question Id : 260269189 Display Question Number : Yes Single Line Question Option : No Option Orientation : Vertical

18 मई 2017 को आयोजित जीएसटी परिषद की बैठक में हुई चर्चा के अनुसार पिज्जा ब्रेड के लिए जीएसटी दर है:

Options :

1. ✔ 5%

2. ✘ 0% (शून्य)

3. ✘ 28%

4. ✘ 18%

Question Number : 90 Question Id : 260269190 Display Question Number : Yes Single Line Question Option : No Option Orientation : Vertical

Which Schedule of the Indian Constitution gives a list of recognised languages in India?

Options :

1. ✘ First Schedule

2. ✔ Eighth Schedule

3. ✘ Third Schedule

4. ✘ Tenth Schedule

Question Number : 90 Question Id : 260269190 Display Question Number : Yes Single Line Question Option : No Option Orientation : Vertical

भारतीय संविधान की कौन-सी अनुसूची भारत में मान्यताप्राप्त भाषाओं की सूची प्रदान करती है?

Options :

1. ✘ पहली अनुसूची

2. ✔ आठवीं अनुसूची

3. ✘ तीसरी अनुसूची

4. ✘ दसवीं अनुसूची

Question Number : 91 Question Id : 260269191 Display Question Number : Yes Single Line Question Option : No Option Orientation : Vertical

Which of the following structural and functional studies is Venkatraman Ramakrishnan associated with?

Options :

1. ✔ Ribosome
2. ✘ Photosynthesis
3. ✘ Cytokinesis
4. ✘ DNA

Question Number : 91 Question Id : 260269191 Display Question Number : Yes Single Line Question Option : No Option Orientation : Vertical

निम्नलिखित में से कौन से संरचनात्मक और कार्यात्मक अध्ययन से वेंकटरामन रामकृष्णन संबंधित है?

Options :

1. ✔ राइबोसोम
2. ✘ प्रकाश संश्लेषण
3. ✘ कोशिकाद्रव्य विभाजन
4. ✘ डीएनए

Question Number : 92 Question Id : 260269192 Display Question Number : Yes Single Line Question Option : No Option Orientation : Vertical

Which of the following countries hosted the 2017 FIFA U-20 World Cup?

Options :

1. ✔ South Korea
2. ✘ Netherlands
3. ✘ India
4. ✘ England

Question Number : 92 Question Id : 260269192 Display Question Number : Yes Single Line Question Option : No Option Orientation : Vertical

निम्नलिखित में से किस देश ने 2017 के फीफ़ा अंडर-20 (FIFA U-20) विश्व कप की मेज़बानी की?

Options :

1. ✓ दक्षिण कोरिया
2. ✗ नीदरलैंड्स
3. ✗ भारत
4. ✗ इंग्लैंड

Question Number : 93 Question Id : 260269193 Display Question Number : Yes Single Line Question Option : No Option Orientation : Vertical

Who among the following was awarded the Arjuna Award for the achievements in Billiards and Snooker?

Options :

1. ✗ Edward Sequeira
2. ✗ Anthony Maria Irudayam
3. ✓ Wilson Jones
4. ✗ Sudhir Karmakar

Question Number : 93 Question Id : 260269193 Display Question Number : Yes Single Line Question Option : No Option Orientation : Vertical

निम्नलिखित में से किसे बिलियर्ड्स और स्नूकर में हासिल उपलब्धियों के लिए अर्जुन पुरस्कार से सम्मानित किया गया?

Options :

1. ✗ एडवर्ड सिक्वेरा
2. ✗ एंथनी मारिया इरुदयम
3. ✓ विल्सन जोन्स
4. ✗ सुधीर कर्माकर

Question Number : 94 Question Id : 260269194 Display Question Number : Yes Single Line Question Option : No Option Orientation : Vertical

Name the winning team of the Ranji Trophy 2016-17.

Options :

1. ✘ Mumbai
2. ✘ Hyderabad
3. ✔ Gujarat
4. ✘ Jharkhand

Question Number : 94 Question Id : 260269194 Display Question Number : Yes Single Line Question Option : No Option Orientation : Vertical

रणजी ट्रॉफी 2016-17 की विजेता टीम का नाम बताएं।

Options :

1. ✘ मुंबई
2. ✘ हैदराबाद
3. ✔ गुजरात
4. ✘ झारखंड

Question Number : 95 Question Id : 260269195 Display Question Number : Yes Single Line Question Option : No Option Orientation : Vertical

Which of the following Indian states is associated with wooden puppets called Yampuri?

Options :

1. ✘ Gujarat
2. ✘ Tamil Nadu
3. ✘ Madhya Pradesh
4. ✔ Bihar

Question Number : 95 Question Id : 260269195 Display Question Number : Yes Single Line Question Option : No Option Orientation : Vertical

निम्नलिखित में से कौन-सा भारतीय राज्य यमपुरी नामक लकड़ी की कठपुतलियों से संबद्ध है?

Options :

1. ✘ गुजरात

2. ✘ तमिलनाडु
3. ✘ मध्य प्रदेश
4. ✔ बिहार

Question Number : 96 Question Id : 260269196 Display Question Number : Yes Single Line Question Option : No Option Orientation : Vertical

Which one of the following is different from the rest?

Options :

1. ✘ Violet
2. ✘ Red
3. ✔ Black
4. ✘ Yellow

Question Number : 96 Question Id : 260269196 Display Question Number : Yes Single Line Question Option : No Option Orientation : Vertical

निम्नलिखित में से कौन सा विकल्प अन्य विकल्पों से भिन्न है?

Options :

1. ✘ बैंगनी
2. ✘ लाल
3. ✔ काला
4. ✘ पीला

Question Number : 97 Question Id : 260269197 Display Question Number : Yes Single Line Question Option : No Option Orientation : Vertical

Select the best option to complete the analogy.

Forest : Tree :: Lawn : _____

Options :

1. ✔ Grass

2. ✘ Field

3. ✘ Garden

4. ✘ Plants

Question Number : 97 Question Id : 260269197 Display Question Number : Yes Single Line Question Option : No Option Orientation : Vertical

सहि विकल्प का चयन कर सादृश्य को पुरा करें।

वन : वृक्ष :: लान : _____

Options :

1. ✔ घास

2. ✘ खेत

3. ✘ बगीचा

4. ✘ पौधे

Question Number : 98 Question Id : 260269198 Display Question Number : Yes Single Line Question Option : No Option Orientation : Vertical

Insert the word that completes the first word and begins the second.

RA(-----) ACH

Options :

1. ✔ RE

2. ✘ ED

3. ✘ ER

4. ✘ IS

Question Number : 98 Question Id : 260269198 Display Question Number : Yes Single Line Question Option : No Option Orientation : Vertical

उस विकल्प को चयन करें जो खाली जगह में रखे जाने पर पहले शब्द को पूरा करता हो और दूसरे का आरंभ करता हो।

RA(-----) ACH

Options :

1. ✓ RE

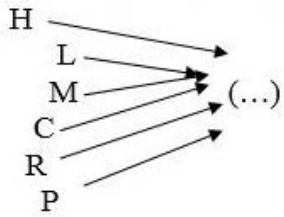
2. ✗ ED

3. ✗ ER

4. ✗ IS

Question Number : 99 Question Id : 260269199 Display Question Number : Yes Single Line Question Option : No Option Orientation : Vertical

Which of the following options, when joined by each letter in the image as a prefix, forms a meaningful English word?



Options :

1. ✗ IKE

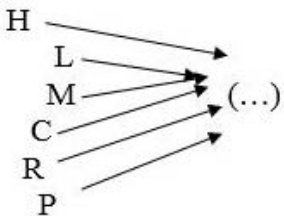
2. ✗ IER

3. ✗ NT

4. ✓ OPE

Question Number : 99 Question Id : 260269199 Display Question Number : Yes Single Line Question Option : No Option Orientation : Vertical

निम्नलिखित में से कौन-सा ऐसा विकल्प है जिसे एक उपसर्ग के रूप में जोड़े जाने पर चित्र में दिखाया गया प्रत्येक अक्षर एक सार्थक अंग्रेज़ी शब्द बनाता है?



Options :

1. ✗ IKE

2. ✗ IER

3. ✗ NT

4. ✓ OPE

Question Number : 100 Question Id : 260269200 Display Question Number : Yes Single Line Question Option : No Option Orientation : Vertical

Select the correct option that would complete the number series below.

2, 4, 7, 11, 16, 22, 29 ,37, _____

Options :

1. ✗ 39

2. ✓ 46

3. ✗ 49

4. ✗ 51

Question Number : 100 Question Id : 260269200 Display Question Number : Yes Single Line Question Option : No Option Orientation : Vertical

सही विकल्प का चयन कर निचे दी गयी अंकों की श्रृंखला को पूरा करें।

2, 4, 7, 11, 16, 22, 29 ,37, _____

Options :

1. ✗ 39

2. ✓ 46

3. ✗ 49

4. ✗ 51